



DELHI PUBLIC SCHOOL, SUSHANT LOK  
TRIPLE TRACK PLAN  
CLASS – IV (2017–18)

Learning must cater to every type of learner to accommodate the pace at which each child learns. Starting this year we bring to you a set of Triple Track Worksheets, graded from simple to challenging, hence offering something for each child. Let your child attempt the worksheets, he/she is most comfortable doing. Enhanced learning will then happen automatically.\*

\*A word of caution – Please don't push your child to start with the highest difficulty level (Level-3).

Principal

DELHI PUBLIC SCHOOL, SUSHANT LOK  
TRIPLE TRACK PLAN – November'17  
CLASS – IV



**SUBJECT: ENGLISH**  
**THE HORNBILL**  
**WORKSHEET-I**

**1. Read the following lines and answer the questions that follow:**

‘She loved him very much and tried to spend as much time as she could with him.’

(a) In the above lines, ‘she’ refers to ..... and ‘him’ refers to .....

(b) Why could she not spend much time with him?

.....  
.....  
.....

(c) Make a sentence of your own with ‘tried’.

.....  
.....

**2. Answer the following questions:**

(a) How was Sampari different from Kachak?

.....  
.....  
.....

(b) Was there any change in Kachak after the birth of their son? Give reasons.

.....  
.....  
.....

(c) Who used to take care of the baby, while Sampari was away?

.....  
.....

(d) Who attacked the boy?

.....  
.....

## INFORMAL LETTER WRITING

### 3. Complete the following letter.

Write a letter to your friend telling him/ her how you celebrated Diwali this year.

Help box: no crackers, decorated house, candles, lights, new clothes, exchanged sweets, rangoli

.....  
.....  
.....  
.....

Dear .....

I am fine here and hope that you are also doing well. I had ten days holidays for Diwali this year. How did you celebrate Diwali? I had planned to celebrate a green Diwali. Though it was difficult to resist crackers, but I

.....  
.....  
.....  
.....  
.....  
.....  
.....

Do share with me how you celebrated Diwali. Waiting for an early reply.

Yours .....

.....

विषय—हिंदी  
अभ्यास पत्र—1  
गिनती, क्रिया, विराम चिह्न  
संवाद लेखन

1. मिलान कीजिए।

(क)	उनासी	51
(ख)	इक्यावन	79
(ग)	अड़सठ	89
(घ)	नवासी	68

2. क्रिया शब्दों पर गोला बनाइए।

(क)	सुंदर	नहाना	अपना
(ख)	बोलना	ठंडा	उसका
(ग)	होशियार	अच्छा	हँसना
(घ)	दौड़ना	दूध	हँसमुख

3. मिलान कीजिए।

(क)	पूर्ण विराम	( , )
(ख)	अल्पविराम	(   )
(ग)	योजक चिह्न	( ? )
(घ)	प्रश्नवाचक	( — )

4. राहुल की कक्षा में एक नए लड़के ने प्रवेश लिया है जिसका नाम अमन है, इस विषय पर अमन और राहुल के बीच हुए संवाद (बातचीत) लिखिए।

राहुल – तुम्हारा क्या नाम है?

अमन— .....

राहुल— .....

अमन— .....

राहुल – .....

अमन— .....

राहुल – .....

अमन— .....

राहुल – .....



**SUBJECT: MATH  
WORKSHEET-I**

**Content: Measurement and Area & Perimeter**

**1. Fill in the blanks:**

- (a) Water in a glass is measured in .....(ml/L).
- (b) Perimeter of a square is .....times its sides.
- (c) There are .....grams in 2kg.
- (d) The basic unit of length is .....
- (e)  $250\text{ml}+250\text{ml}+\dots\dots\dots=1000\text{ml}$ .

**2. Do as directed:**

- (a) Convert 50 kg 200 g to grams.
- (b) Find the missing fourth side of a figure with perimeter 25cm and three sides as 7cm, 6cm and 8cm.
- (c) Add 14m 14cm and 72m 80 cm.
- (d) Find the area and perimeter of the given figure if each side is 1unit.



- (e) Subtract 2kg 400g from 7kg 250g

- 3. Arun drives 140km700m on day 1 and 275km85m on day 2. What is the total distance travelled by him?**
- 4. A school playground is 400m long and 45m wide. Find the distance covered if you take one round of the field.**
- 5. In a birthday party each guest gets 150ml juice. If juice has to be arranged for 20 people, how much juice is required?**
- 6. A water reservoir has 445L 500 ml of water. It has to be distributed to 5 tanks equally. How much water will be filled in each tank?**

**SUBJECT: SCIENCE**  
**CHAPTER: PLANTS; LIVING AND SURVIVING**  
**WORKSHEET-I**

**1. True / False**

- (a) Breathing roots are found in plain area (Land) . \_\_\_\_\_
- (b) Pitcher plant is an insectivorous plant . \_\_\_\_\_
- (c) Underwater plants grows on the surface of water . \_\_\_\_\_
- (d) Tasty dishes can be made from the stem of the lotus plant . \_\_\_\_\_

**2. Match the following:**

- |                    |                           |
|--------------------|---------------------------|
| (a) Mangroves      | Rice, wheat, jowar, bajra |
| (b) Photosynthesis | Eat insects               |
| (c) Spines         | Underwater plant          |
| (d) Pine           | Breathing roots           |
| (e) Water hyacinth | Plants                    |
| (f) Duckweed       | Hilly and cold Area       |
| (g) Venus flytrap  | Floating plant            |
| (h) Cereal         | Cactus                    |

**3. Name the plants of the grass family which are:**

- (a) Used as food for humans and animals. (any 2)  
.....
- (b) Used for making brooms, baskets, chains, mat etc.  
.....
- (c) Used for making paper.  
.....

**4. Name the area where the following plants are found:-**

- |                    |                      |
|--------------------|----------------------|
| (a) Cactus.....    | (b) Lotus.....       |
| (c) Pine.....      | (d) Coconut.....     |
| (e) Date Palm..... | (f) Banyan tree..... |
| (g) Walnut.....    | (h) Sea Weed.....    |



**SUBJECT: SOCIAL SCIENCE**  
**CHAPTER: AGRICULTURE AND INDUSTRIES**  
**WORKSHEET-I**

**Multiple choice questions:**

- 1. In North India the production of which of these is the maximum?**
  - (a) Wheat
  - (b) Rice
  - (c) Oilseeds
  - (d) Spices
  
- 2. Which of these is not an oilseed?**
  - (a) Groundnut
  - (b) Tea
  - (c) Mustard
  - (d) Linseed
  
- 3. Which of these is an advantage for large-scale industry over small-scale industry?**
  - (a) It can be set up at low-cost
  - (b) It does not need heavy machinery
  - (c) Better quality goods can be made
  - (d) It can be quickly set up
  
- 4. Which industry started only a few years ago has grown very rapidly in India?**
  - (a) Steel
  - (b) Computer Software
  - (c) Textile
  - (d) Oil Refinery

**SUBJECT: COMPUTER SCIENCE**  
**CHAPTER: MICROSOFT POWERPOINT 2010**  
**WORKSHEET- I**

**1. Unscramble these words and write them correctly in the blanks:**

- (a) R E P N E S A T I O N \_\_\_\_\_
- (b) L S I E D S A N E P \_\_\_\_\_
- (c) S I L E D H S O W \_\_\_\_\_
- (d) O W P R E O P N I T \_\_\_\_\_
- (e) I T L E T E L D S I \_\_\_\_\_

**2. Fill in the blanks:**

- (a) The .....is a presentation software that helps you to create a presentation.
- (b) A.....is a box with dotted border that contains text and other elements on a slide.
- (c) The first slide of a presentation is called the .....Slide.
- (d) The .....is the narrow area at the bottom of the slide pane used to type notes.
- (e) The .....tab contains options to create, open or save a presentation.

**3. Match these columns correctly:**

(a)	Slides		Dotted boxes on a slide that can contain text, pictures, etc.
(b)	Placeholders		Displays the text content of slide
(c)	Slide layout		Electronic pages of a presentation
(d)	Slide Show		Arrangement of placeholders on a slide
(e)	Slides pane		Full screen view of a presentation
(f)	Outline tab		Area where you can work directly on the slides in Normal View.

**4. Open Ms-Power point and make a presentation on Types of Flowers. (5-6 slides)**

विषय-संस्कृत  
कार्य पत्रिका-1  
कक्षा-चतुर्थ

1. एक पद में उत्तर दीजिए।

(क) पुत्रः कुत्र गच्छति?

.....

(ख) कन्या किम् पिबति?

.....

(ग) बालकाः किम् क्षिपन्ति?

.....

(घ) सा कुत्र क्रीडति?

.....

(ङ) ताः किम् पश्यन्ति?

.....

2. शब्दों को सही क्रम में लगाकर वाक्य बनाइए।

वदति, सत्यम्, तौ, देशम्, सदा, सैनिकाः, पुष्पाणि,  
मिलन्ति, सः, पठतः, रक्षन्ति, विकसन्ति, ते

उदाहरण हेतु देखिए—सः सदा सत्यम् वदति।

.....

.....

.....

.....

3. निम्नलिखित अव्यय शब्दों के हिंदी अर्थ लिखिए।

(क) इतस्ततः .....

(घ) तु .....

(छ) अपि.....

(ख) एव .....

(ङ) तदा .....

(ज) बहिः.....

(ग) च .....

(च) यत्र .....

(झ) तर्हि.....

**SUBJECT: GERMAN  
WORK SHEET-I**

**1. Der, die oder das?**

- (a) .....Fernseher
- (b) .....Bett
- (c) .....Schrank
- (d) .....Glas
- (e) .....Zeitung
- (f) .....Wohnzimmer
- (g) .....Sofa
- (h) .....Kinderzimmer
- (i) .....Haus
- (j) .....Auto

**2. Was passt zusammen!**

- |                                 |                              |     |
|---------------------------------|------------------------------|-----|
| (a) Das ist mein Haus.          | Where do you come from?      | ( ) |
| (b) Wo wohnst du?               | I come from India?           | ( ) |
| (c) Woher kommst du?            | This is my house.            | ( ) |
| (d) Ich komme aus Indien.       | Where do you live?           | ( ) |
| (e) Wie heisst dein Bruder?     | What is it called in German? | ( ) |
| (f) Er kommt aus Deutschland.   | What is your brother's name? | ( ) |
| (g) Wie heisst das auf Deutsch? | He comes from India.         | ( ) |

**SUBJECT: FRENCH  
WORKSHEET-I**

**1. Complétez avec les articles définis:**

- (a) \_\_\_\_\_ père
- (b) \_\_\_\_\_ horloge
- (c) \_\_\_\_\_ tante
- (d) \_\_\_\_\_ glaces

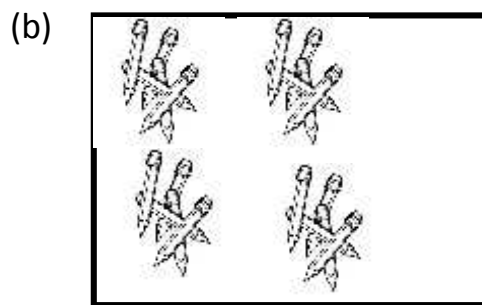
**2. Complétez avec les articles indéfinis:**

- (a) \_\_\_\_\_ bonbons
- (b) \_\_\_\_\_ oiseau
- (c) \_\_\_\_\_ pizza
- (d) \_\_\_\_\_ chat

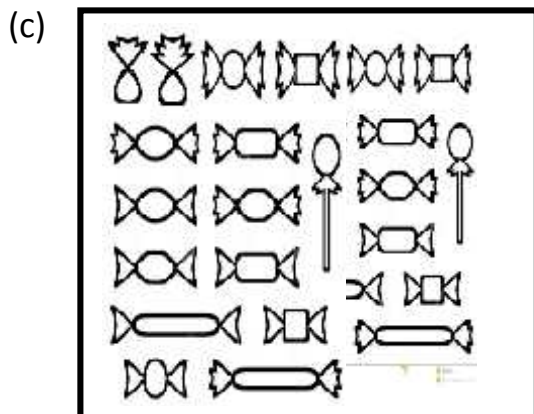
**3. Comptez et écrivez les nombres:**



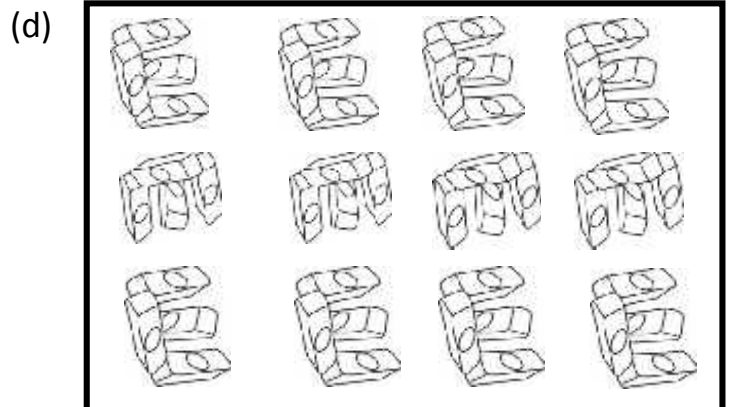
\_\_\_\_\_ chiens



\_\_\_\_\_ crayons



\_\_\_\_\_ bonbons



\_\_\_\_\_ gommés

DELHI PUBLIC SCHOOL, SUSHANT LOK  
TRIPLE TRACK PLAN – November'17  
CLASS – IV



**SUBJECT: ENGLISH**  
**THE HORNBILL**  
**WORKSHEET-II**

**1. Read the following lines and answer the questions that follow:**

‘Kachak was very lazy and most unwilling to work in the fields.

Moreover he would often shout at his wife.’

(a) ..... was Kachak’s wife.

(b) Make a sentence of your own with ‘unwilling’.

.....  
.....

**2. Answer the following questions:**

(a) Where did Sampari and Kachak live?

.....

(b) How did Kachak spend his time?

.....  
.....

(c) How can you tell that Sampari was very hardworking?

.....  
.....  
.....

(d) At what time did she notice that their son was missing?

.....  
.....  
.....

(e) How did she react when she could not find her son at home?

.....  
.....  
.....

## INFORMAL LETTER WRITING

### 3. Complete the following letter.

Write a letter to your friend telling him/ her about the special gift you got from your parents this Diwali.

.....  
.....  
.....  
  
.....

Dear .....

I am fine here and hope you are doing fine. How did you celebrate Diwali?

I am so excited to tell you about the special Diwali gift I got from my parents this time. It is a .....

.....  
.....  
.....  
.....  
.....  
.....  
.....  
.....  
.....  
.....

Bye for now. Convey my regards to your parents.

Your .....  
.....



विषय-हिंदी  
अभ्यास पत्र-2  
गिनती, क्रिया, विराम चिह्न  
संवाद लेखन

1. निम्नलिखित अंकों को शब्दों में लिखिए।

(क) 58 .....

(ख) 66 .....

(ग) 89 .....

(घ) 97 .....

2. क्रिया शब्दों के सही रूप से खाली स्थान भरिए।

(क) पक्षी आकाश में.....। (उड़ना)

(ख) बच्चा .....। (हँसना)

(ग) पिताजी बाज़ार से से .....। (आना)

(घ) अध्यापक कहानी .....। (सुनाना)

3. दिए गए वाक्यों में उचित विराम चिह्न लगाइए।

(क) मेरी माँ बहुत दयालु हैं

(ख) वह किसकी पुस्तक है

(ग) गाड़ी धीरे  धीरे चल रही है।

(घ) अरे  आप आ गए?

4. 'रोहित कई दिनों के बाद आज विद्यालय आया है, इस विषय पर रोहित और उसके दोस्त शिखर के बीच हुए संवाद (बातचीत) लिखिए।

शिखर— रोहित, तुम इतने दिनों से विद्यालय क्यों नहीं आ रहे थे?

रोहित—.....

शिखर—.....

रोहित —.....

शिखर—.....

रोहित —.....

शिखर—.....

रोहित —.....



**SUBJECT: MATH**  
**WORKSHEET –II**

**Content: Measurement and Area & Perimeter.**

**1. Fill in the blanks:**

- (a)  $2\frac{3}{4}$  km = .....m
- (b) 1450cm = .....m .....cm
- (c) Perimeter of a rectangle is ..... the sum of length and breadth.
- (d) 89 kg 40g = .....grams.

**2. Do as directed:**

- (a) Cost of 1kg of pulses is 82 rupees. Find the cost of
  - (i) 5 kg      (ii)  $\frac{1}{2}$  kg
- (b) Find the perimeter of the floor of a room with length 14m and breath 7m.
- (c) Arrange in descending order.  
7kg 50g , 7000g, 7  $\frac{1}{2}$ kg, 7kg 500g
- (d) The perimeter of a triangle is 56cm and the measure of its two sides are 18cm and 19cm. Find the third side.
- (e) Divide 475m 45cm wire into 15 parts.

**3. Find the cost of fencing a square park with side 20m at Rs 45 per metre.**

**4. Raj sold 4kg 450g of vegetables in morning and 2kg 50 g in evening. If he has 3kg 500g left in the shop, what is the total quantity the shopkeeper had at the start of the day?**

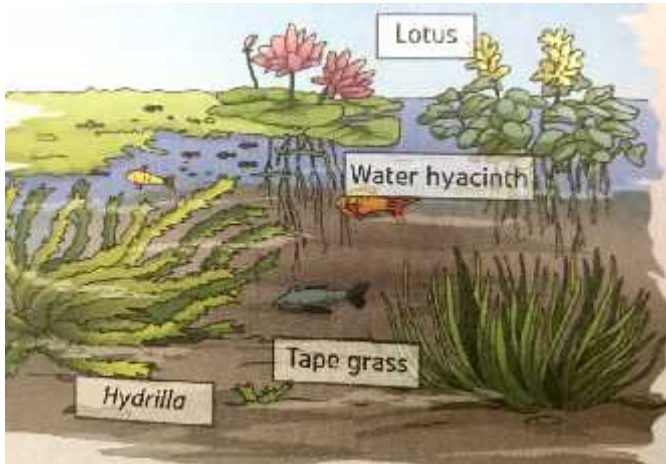
**5. A carpet has a length that is twice its breadth. If its breadth is 9cm, find its perimeter.**

**6. In a society each house is supplied with 85L200ml of water per week. Calculate the quantity of water required by 28 houses in a week.**

**7. Madhur weighed 35kg 400g when he was 8 years old. After two years he weighed 42kgs 315g. How much weight has he gained in two years?**

**SUBJECT: SCIENCE**  
**CHAPTER: PLANTS; LIVING AND SURVIVING**  
**WORKSHEET-II**

1. Given below is the picture of a pond with various aquatic plants. Identify which of the plants are fixed, floating and underwater and write their names against the categories mentioned below.



- (a) Floating plants  
 .....
- (b) Fixed plants  
 .....
- (c) Underwater plants  
 .....

2. Fill in the blanks:

- (a) The word..... means living on land.
- (b) In hilly areas where it is generally cold, trees are.....and.....
- (c) In plains trees have a lot of branches, they can bear ..... and shed their leaves in.....
- (d) In .....and ..... areas trees do not shed their leaves in winter .
- (e) In ..... most plants grow without leaves.

**3. What are insectivorous plants? Name any three of them.**

.....  
.....  
.....  
.....

**4. Answer the following:**

**What are breathing roots? Where these are found?**

.....  
.....  
.....  
.....

**SUBJECT: SOCIAL SCIENCE**  
**CHAPTER: AGRICULTURE AND INDUSTRIES**  
**WORKSHEET-II**

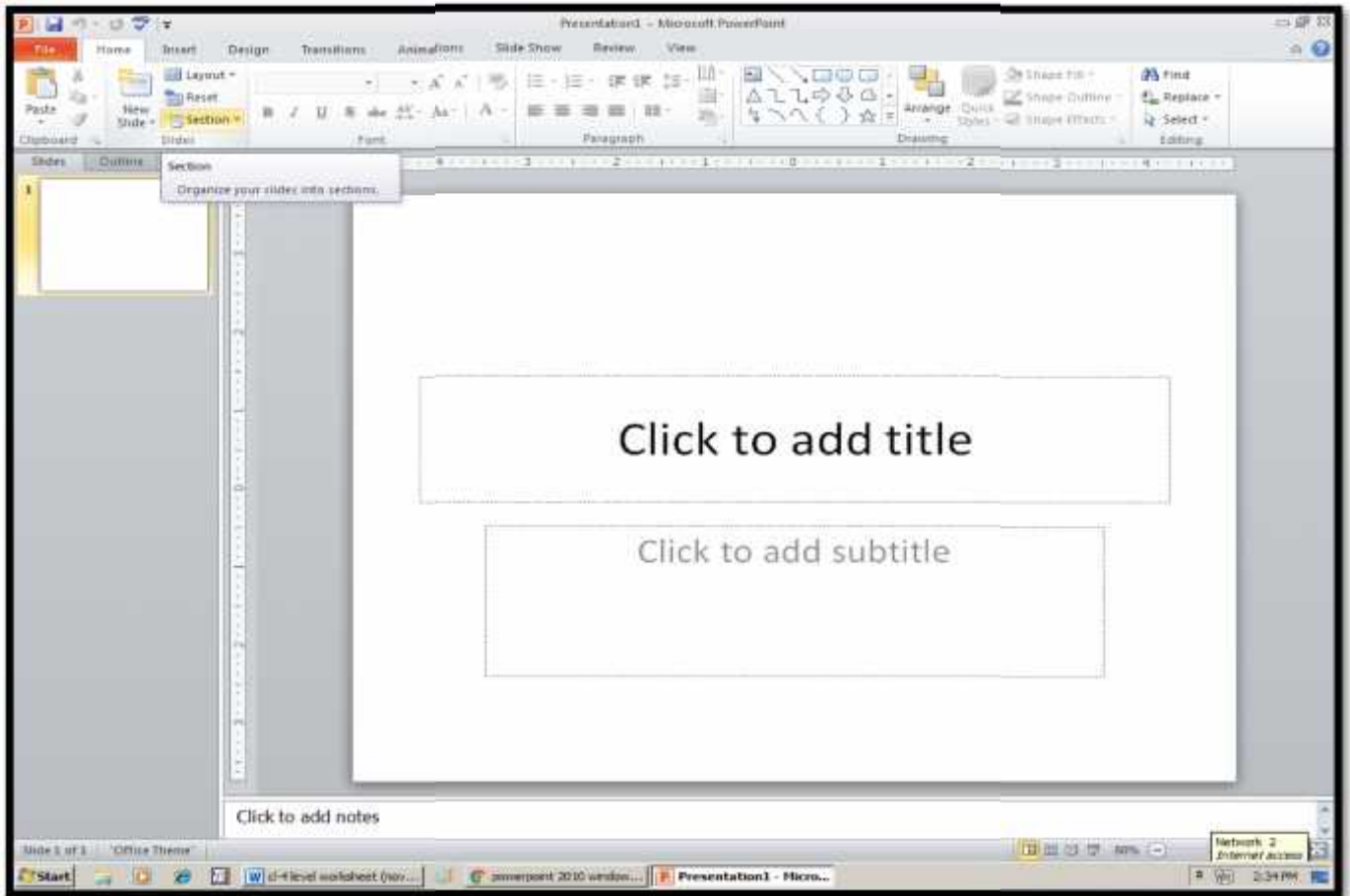
**1. Fill in the blanks:**

- (a) ..... is the main staple food of north and north-western India.
- (b) Spices are mainly grown in the states of ..... and.....
- (c) Sugar is made from .....
- (d) Crops that are harvested in summer are called .....crops.
- (e) Jute is used to make .....
- (f) Crops that are harvested in winter are called ..... crops.
- (g) The example of any one livestock is .....
- (h) Wheat, rice, bajra and ragi are examples of .....
- (i) The main occupation of the people of Northern India is .....  
and .....
- (j) The Green Revolution was launched in India in the .....

**SUBJECT: COMPUTER SCIENCE**  
**CHAPTER– MICROSOFT POWERPOINT 2010**  
**WORKSHEET–II**

**1. Label the different components of Ms- Power point window:**

File tab, Outline tab, Slide tab, Slide Pane, Placeholders, Notes Pane, Quick Access Toolbar, Title Bar



**2. Write the shortcut keys for the following:**

- (a) To save a presentation .....
- (b) To open a presentation .....
- (c) To close a presentation .....
- (d) To create a new presentation .....
- (e) To insert a new slide .....
- (f) To run the presentation .....

**3. Create a PowerPoint presentation on any story of your choice. Do not forget to give the moral of the story at the end.**

विषय-संस्कृत  
कार्य पत्रिका-2  
कक्षा-चतुर्थ

1. निम्न शब्दों के अर्थ हिंदी में लिखिए।

- (क) सष्ठु .....
- (ख) कुद्धयति .....
- (ग) वार्तालाप: .....
- (घ) आम् .....
- (ङ) अन्यथा .....

2. नीचे दिए गए कर्त्ता के आगे मनपसंद क्रिया जोड़कर वाक्य बनाइए।

- (क) त्वम् ..... ।
- (ख) अहम् ..... ।
- (ग) सः ..... ।
- (घ) तौ ..... ।
- (ङ) ते ..... ।

3. वार्तालाप को सही शब्द लिखकर पूरा कीजिए।

- (क) तव नाम किम् .....?
- (ख) मम् नाम् .....अस्ति ।
- (ग) अहम् .....कक्षायाम् पठामि ।
- (घ) अहम् .....वर्षीया बालः अस्मि ।
- (ङ) अहम् दिल्ली पब्लिक .....पठामि ।
- (च) अहम् .....पठामि
- (छ) अहम् .....बालः अस्मि ।



# SUBJECT: GERMAN

## WORKSHEET-II

### 1. Wie heissen die Nomen auf Deutsch!

- (a) The bedroom - .....
- (b) The picture - .....
- (c) The washing machine - .....
- (d) The kitchen - .....
- (e) The writing table - .....
- (f) The room - .....
- (g) The dining room - .....

### 2. Fulle die Lucken!

- (a) D\_ \_ Gi\_ ar\_ e
- (b) D\_ \_ B\_ d
- (c) D\_ \_ Z\_ it\_ n\_
- (d) D\_ \_ U\_ r
- (e) D\_ \_ K\_ n\_ erz\_ mm\_ r

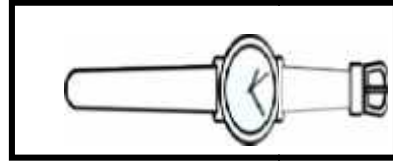
### 3. Schreibe die Zahlen auf Deutsch.

- (a) 10 - .....
- (b) 12 - .....
- (c) 20 - .....
- (d) 25 - .....
- (e) 27 - .....
- (f) 30 - .....
- (g) 33 - .....
- (h) 35 - .....

**SUBJECT: FRENCH  
WORKSHEET-II**

**1. Complétez avec les articles définies ou indéfinis:**

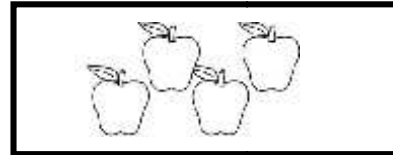
(a) \_\_\_\_\_ montre; \_\_\_\_\_ montre de M. Sparsh.




(b) \_\_\_\_\_ stylo; \_\_\_\_\_ stylo de Aarchi.



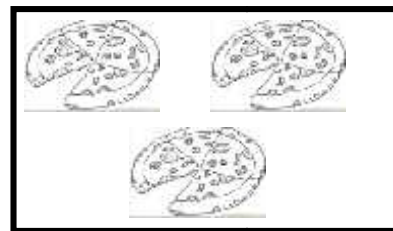
(c) \_\_\_\_\_ pommes; \_\_\_\_\_ pommes de Navya.



(d) \_\_\_\_\_ oiseau; \_\_\_\_\_ oiseau de Vnesh.



(f) \_\_\_\_\_ pizza; \_\_\_\_\_ pizzas de Pulkit.



**2. Écrivez les nombres en mots:**

(a) 32 \_\_\_\_\_

(b) 16 \_\_\_\_\_

(c) 45 \_\_\_\_\_

(d) 8 \_\_\_\_\_

(e) 27 \_\_\_\_\_

**3. Chassez l'intrus:**

- (a) dix / six / vingt / trente \_\_\_\_\_
- (b) les / des / la / l' \_\_\_\_\_
- (c) un / une / le / des \_\_\_\_\_
- (d) vingt et un / trente et un / quarante et un / cinquante \_\_\_\_\_
- (e) stylo / règle / crayon / glace \_\_\_\_\_

DELHI PUBLIC SCHOOL, SUSHANT LOK  
TRIPLE TRACK PLAN – November '17  
CLASS – IV



**SUBJECT: ENGLISH**  
**THE HORNBILL**  
**WORKSHEET-III**

**1. Read the following lines and answer the questions that follow:**

‘When Sampari left, Kachak picked up his flute and began playing it.’

(a) Where did Sampari go?

.....  
.....  
.....

(b) What instructions had Sampari given to Kachak?

.....  
.....  
.....

(c) Did Kachak follow the instructions? What were the consequences?

.....  
.....  
.....

**2. Answer the following questions:**

(a) How old was the child when he went missing?

.....  
.....

(b) Why did Sampari go to the fields?

.....  
.....  
.....

(c) Was Sampari right in cursing her husband? Why?

.....  
.....  
.....

## INFORMAL LETTER WRITING

### 3. Complete the following letter.

Write a letter to your friend telling him/ her about the Night Stay you had with your cousins, last weekend at home.

.....  
.....  
.....  
  
.....

Dear .....

It's long since we met. Hope you are in good health and doing well in studies. I want to share my experience with you about the night stay I had with my cousins last weekend, at home. It was great and fun filled.

.....  
.....  
.....  
.....  
.....  
.....

I invite you to come over to my place next weekend so that we can have a good time together. Waiting for an early reply.

Yours .....

.....

विषय—हिंदी  
अभ्यास पत्र—3  
गिनती, क्रिया, विराम चिह्न  
संवाद लेखन

1. रिक्त स्थानों की पूर्ति कीजिए।

- |     |         |       |       |
|-----|---------|-------|-------|
| (क) | इकसठ    | बासठ  | तिरसठ |
| (ख) | सतहत्तर | ..... | ..... |
| (ग) | बयासी   | ..... | ..... |
| (घ) | पचानवे  | ..... | ..... |

2. उचित क्रिया शब्दों द्वारा रिक्त स्थान भरिए।

- (क) मोहन बहुत अच्छा लड़का ..... ।
- (ख) बहुत से फूल ..... ।
- (ग) गिलास में गरम दूध..... ।
- (घ) मैं ठंडे पानी से ..... ।

3. निम्नलिखित विराम चिह्नों से वाक्य बनाइए।

- (क) पूर्ण विराम (।) .....
- (ख) अल्पविराम (,) .....
- (ग) योजक चिह्न (—) .....
- (घ) प्रश्नवाचक चिह्न ( ? ) .....
- (ङ) विस्मयादिबोधक (!) .....

4. 'चौदह नवंबर को रमन के विद्यालय में बाल दिवस मनाया गया' इस विषय पर रमन और माँ के बीच हुए संवाद (बातचीत) लिखिए।

रमन – .....

माँ – .....

रमन – .....

माँ – .....

रमन – .....

माँ – .....

रमन – .....

माँ – .....





**SUBJECT: MATH**  
**WORKSHEET-III**

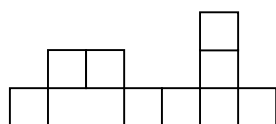
**Content: Measurement and Area & Perimeter.**

**1. Fill in the blanks:**

- (a)  $8\text{kg} = \dots \times 3000\text{g} + 2000\text{g}$
- (b) Perimeter of a square park is 524m. Then its each side is.....
- (c)  $4\frac{3}{4}\text{ km} = \dots \text{m}$
- (d) 6 cans of 200ml juice =..... L.....ml of juice.
- (e)  $7085\text{cm} = \dots \text{m} \dots \text{cm}$
- (f) If the perimeter of a triangle with sides 38cm and 26cm is 94cm, then its third side is.....

**2. Do as directed:**

- (a) Find the number of ribbons of length 50cm each which can be cut from 4metres.
- (b)  $8\text{ kg } 4\text{g} + 15\text{ kg } 500\text{ g} + 60\text{ kg} + 7\text{ kg } 196\text{ g} = \dots$
- (c) A lace is to be put around a square table cloth with 8cm. Find the cost of lacing it at Rs 15 per centimetre.
- (d) A barrel holds 14L of juice. How many cups of 200ml each can it fill?
- (e) Find the area and perimeter of given figure. ( each side of small square is 1cm).



- 3. Riya runs 12km 7m in a day. How many kilometers does she run in the month of September? (Give the answer in meters)**
- 4. The breadth of a rectangle is 16cm. Its length is twice its breadth. What is the perimeter of the rectangle?**
- 5. A box and its contents weighs 19kg 600g. If the weight of the empty box is 1kg 85g, find the weight of the content the box.**
- 6. A rectangular garden and a square garden have the same perimeters. If the sides of the rectangular garden are 15m and 8m, what is the side of the square garden?**

**SUBJECT: SCIENCE**  
**CHAPTER: PLANTS; LIVING AND SURVIVING**  
**WORKSHEET-III**

**1. Fill in the blanks with correct word:**

- (a) Spines prevent the loss of water in.....plants .
- (b) Coned shaped flowers are found in .....
- (c) Trees of plain land shed their leaves in ..... season .
- (d) The green, fleshy stem in cactus contains.....
- (e) ..... trees do not shed their leaves in any season .
- (f) Trees with needle- like leaves are found in.....
- (g) ..... soil is the main feature of marshy areas .
- (h) Plants in which roots are connected to the bed of the pond are called .....
- (i) ..... give shelter and protection to small water animals ( Aquatic animals ) from sun's heat .
- (j) A plant which has stomata only on the upper side is .....
- (k) All cereals belong to the plants of .....family .

**2. Match the following:**

S. No	PLANTS	FEATURE	FUNCTION
(a)	Pine	Stomata on upper surface of the leaves	Prevent water-loss
(b)	Cactus	Cone-shaped	Prevents water from blocking the pores
(c)	Lotus	Spines	Snow can slide off easily

**3. Give two examples for each of the following:**

- (a) Plants in marshy areas .....
- (b) Fixed plants .....
- (c) Desert plants .....
- (d) Underwater plants.....

**SUBJECT: SOCIAL SCIENCE**  
**CHAPTER: AGRICULTURE AND INDUSTRIES**  
**WORKSHEET-III**

**1. Answer the following questions:**

(a) Name the festival of Punjab that is associated with the harvesting of wheat.

.....

(b) Name two beverages that are grown in Tamil Nadu.

..... and.....

(c) What is the name given to the type of farming where farmers use only natural manure?

.....

(d) Name the gas that is produced from animal and agricultural waste.

.....

**2. Differentiate between the following:**

Cottage Industry and Small-Scale Industry


**SUBJECT: COMPUTER SCIENCE**  
**CHAPTER– MICROSOFT POWERPOINT 2010**  
**WORKSHEET–III**

**1. State whether the statement is true or false:**

- (a) You can insert a new slide by clicking on the File tab and then choosing the New option. ( )
- (b) The slides are not orderly grouped together to form a slide show. ( )
- (c) A theme gives the slides of a presentation a particular look. ( )
- (d) Slide navigation pane is used to arrange slides in the Normal view. ( )
- (e) We can apply background color from the Design tab. ( )
- (f) Slide area is the big working space in the middle where you add slide elements such as text, pictures, etc. ( )

**2. Answer the following:**

- (a) Which view shows the thumbnails of slides?  
.....
- (b) Name any four slide layouts.  
.....
- (c) Name the default slide layout which appears when we open a new presentation.  
.....
- (d) What is the shortcut to view the presentation of a particular slide?  
.....
- (e) Name the different options of the Slide show.  
.....
- (f) Which bar contains the frequently used commands?  
.....

**3. Make a presentation on the given topics:**

- (a) Good Habits & Bad Habits      (b) Birds in your neighbourhood

विषय—संस्कृत  
कार्य पत्रिका—3  
कक्षा—चतुर्थ

1. उचित शब्दों से रिक्त स्थान भरिए।

(क) .....पठसि।

(ख) .....लिखन्ति।

(ग) .....वदसि।

(घ) .....धावन्ति।

2. वाक्यों को बहुवचन में परिवर्तित कीजिए।

(क) अहं पाठं पठामि। (क) .....।

(ख) त्वं न पठसि (ख) .....।

(ग) अहं बालः अस्मि। (ग) .....।

(घ) युवां पठथः (घ) .....।

(ङ) सः खादति। (क) .....।

3. प्रथमा विभक्ति के रूपों से रिक्त स्थान भरिए।

(क) सः .....।

(ख) अहम् .....।

(ग) तत् .....।

(घ) सा .....।

(ङ) गजः .....।

(च) लता .....।

(छ) सूर्यः .....।

(ज) बाला .....।

(झ) वाटिका .....।

(ञ) अजा .....।

**SUBJECT: GERMAN**

**WORKSHEET-III**

**1. Male die folgende bunt aus!**



**2. Male die folgende!**

(a) Das Kinderzimmer

(b) Das Wohnzimmer



**3. Schreibe die Nummern.**

(a) einundvierzig - .....

(b) vierunddreissig - .....

(c) dreissig - .....

(d) fünfzig - .....

(e) elf - .....

(f) sechzehn - .....

(g) siebzehn - .....

(h) neunzehn - .....

**SUBJECT: FRENCH  
WORKSHEET-III**

**1. Décrivez votre mère:**

Elle s'appelle \_\_\_\_\_.

Elle a \_\_\_\_\_ ans.

Elle habite à \_\_\_\_\_.

Elle est i\_\_\_\_\_ e.

Elle est b\_\_\_\_\_ e.

**2. Mettez au pluriel:**

(a) J' ai un frère \_\_\_\_\_.

(b) Il a l' horloge \_\_\_\_\_.

(c) Tu as le cahier \_\_\_\_\_.

(d) Elle a le chocolat \_\_\_\_\_.

(e) J' ai un oiseau \_\_\_\_\_.

**3. Traduisez en français:**

(a) He has a tortoise. \_\_\_\_\_

(b) I have some sandwiches. \_\_\_\_\_

(c) You all have erasers? \_\_\_\_\_

(d) They (m) have three aunts. \_\_\_\_\_

(e) We have some books. \_\_\_\_\_