



DELHI PUBLIC SCHOOL, SUSHANT LOK
TRIPLE TRACK PLAN
CLASS – III (2017–18)

Learning must cater to every type of learner to accommodate the pace at which each child learns. Starting this year we bring to you a set of Triple Track Worksheets, graded from simple to challenging, hence offering something for each child. Let your child attempt the worksheets, he/she is most comfortable doing. Enhanced learning will then happen automatically.*

*A word of caution – Please don't push your child to start with the highest difficulty level (Level-3).

Principal

DELHI PUBLIC SCHOOL, SUSHANT LOK
TRIPLE TRACK PLAN – November'17
CLASS – III



SUBJECT: ENGLISH
TOPIC: I WON'T TALK TO YOU!
WORKSHEET-I

1. RTC: Read the given line and answer the questions that follow:

Mr Smith went up to his son's room. But Tommy wouldn't speak to him.

(a) Choose the correct option:

(i) Mr Smith was Tommy's

father uncle cousin

(ii) asked Mr Smith to talk to Tommy.

Tommy Mrs Smith teacher

(iii) Tommy was sitting on the

chair bed floor

2. State whether the given sentence is 'True' or 'False'.

(a) Tommy talked a lot with Mr Smith. ()

(b) Make a sentence of your own using the word 'speak'.

.....

3. Fill in the blanks to complete the following sentences:

(a) Tommy stomped off to his.....and slammed the

(b) Once or twice Tommy came into the and looked at his.....

(c) Mrs Smith saw a on the bedside in Tommy's room.

(d) The sun was into his room the next morning.

(e) It was o'clock and Tommy had his bus.

(f) Tommy was He thought it was his mother's

SUBJECT: ENGLISH
TOPIC: ARTICLES ('A' AND 'AN')
WORKSHEET-I

1. Underline the correct article (a/an) in each sentence.

- (a) Jatin wanted to read a / an comic book.
- (b) The class went on a / an field trip.
- (c) Leena put a / an orange on her yogurt.
- (d) The dog caught a / an stick.
- (e) An / A egg is shaped like a / an oval.
- (f) He is wearing a / an hat.
- (g) My grandmother waited there for a / an hour.
- (h) A / An astronaut can go to the moon.


2. Write the correct article (a/ an) that goes with each word.



..... elf



..... castle



..... book



..... octopus



..... starfish



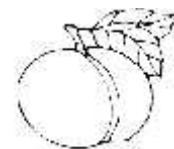
..... scarf



..... alligator



..... spider



..... apricot

विषय—हिंदी
अभ्यास पत्र—1
पाठ्यक्रम—लाल पतंग, एना की किताब
वाक्यांशों के लिए एक शब्द, क्रिया और अनुच्छेद लेखन

1. नीचे दिए गए रिक्त स्थानों में क्रिया शब्द चुनकर लिखिए।

- (क) लड़कारहा है। (पढ़ना/पढ़)
(ख) माँ बच्चे कोरही है। (सुला/सुलाना)
(ग) लड़की झाड़ूरही है। (लगाना/लगा)

2. नीचे दिए गए वाक्यांशों के लिए उचित शब्द पर सही (✓) का निशान लगाइए।

- (क) चित्र बनाने वाला
चित्रकार () अभिनेता () लुहार ()
(ख) जूते बनाने वाला
सुनार () मोची () कुम्हार ()

3. दिए गए शब्दों के सही अर्थ चुनकर लिखिए।

- (क) फुरसत (समय, खाली समय)
(क) दुखी..... (उदास, सुखी)

4. वाक्य बनाइए।

इंतजार

5. प्रश्नों के सही उत्तर चुनिए।

- (क) पतंग ने आसमान में किससे बात की?
मम्मी से कबूतर से

- (ख) एना दुकान के बाहर किसका इंतजार कर रही थी?
मम्मी का पापा का

6. 'मेरा बगीचा' विषय पर दिए गए शब्दों की सहायता से 8-10 वाक्यों का अनुच्छेद लिखिए।

सुंदर, पौधे, रंग-बिरंगे फूल, पानी, देखभाल, झूला, खेल, हरा-भरा

.....
.....
.....
.....
.....

SUBJECT-MATH WORKSHEET- I

Topic:

- Division
- Money

1. Fill in the blanks:

- (a) $3942 \div 10$, Q = R =
- (b) $8000 \div 100$, Q = R =
- (c) $3487 \div 1000$, Q = R =
- (d) $2000 \div 100$, Q = R =
- (e) 1 Rupee =Paise
- (f) Rupee is denoted using the symbol.....
- (g) To convert Rupees into Paise, we.....by 100.
- (h) To convert Paise into Rupees, we.....by 100.

2. Divide and verify:

- (a) $2347 \div 4$
- (b) $6542 \div 2$

3. Express the following amount of money in words:

- (a) ₹ 200.....
- (b) ₹ 350.50.....
- (c) ₹ 4345.....

4. Express the following amount of money in figures:

- (a) Rupees four hundred twenty five.....
- (b) Rupees seven hundred seventy eight.....
- (c) Rupees two thousand three hundred forty.....

5. **Ruchi exercises for 45 minutes everyday. How long will she exercise in 5 days?**
6. **684 trees were planted in rows of 12 each. How many trees were planted in each row?**
7. **Dhruv has 425 balls. He wants to put them in 5 bags. How many balls will be there in each bag?**

SUBJECT- EVS
CHAPTER-CONTINENTS AND OCEANS
WORKSHEET- I

1. Fill in the blanks:

- (a) Model of the earth is called a
- (b)is the drawing of the earth on a flat surface.
- (c) A book of maps is called an
- (d) Large land masses are called
- (e) There are continents and oceans.
- (f) The four directions are,,.....
and.....
- (g) India is a part of the continent of
- (h) The needle of a magnetic compass always rests in
direction.
- (i) is the largest ocean.
- (j) The blue colour on the map shows the

SUBJECT – COMPUTER SCIENCE
Chapter – Log on to Logo
WORKSHEET-I

1. Match the following parts of a Logo screen:

(a)	Screen that shows the results of commands			Recall List Box
(b)	Commands are written in this area			Reset Button
(c)	Button that clears the LOGO main screen			Execute button
(d)	Area that shows the list of all commands			Input Box
(e)	Button used to run the commands			Turtle
(f)	A small triangle in the centre of the main screen			Main Screen

2. Tick (✓) the correct statements and cross (x) out the wrong one.

- (a) LOGO can be used to draw figures.
- (b) The turtle is square in shape.
- (c) The LOGO window is divided into Main Screen and the Commander Window.
- (d) The turtle can move only in forward direction.
- (e) You can exit LOGO by typing 'Bye' in the Input Box.
- (f) Full form of Logo is Logic Oriented Graphic Oriented.

DELHI PUBLIC SCHOOL, SUSHANT LOK
TRIPLE TRACK PLAN – November' 17
CLASS – III



SUBJECT: ENGLISH
TOPIC: I WON'T TALK TO YOU!
WORKSHEET II

1. Sequence the following sentences, according to the story 'I Won't Talk to You'.

- (a) But there on the table, beside his note, was another note.
- (b) "I don't want to talk to you anymore," Tommy shouted angrily.
- (c) At dinner, Tommy was silent. Nobody said a word.
- (d) Mrs Smith saw Tommy's note on the bedside table.
- (e) Mr Smith went up to his son's room to talk to him.
- (f) Tommy woke up at 8 o'clock and had missed his bus.

2. List four actions, from the story, that show Tommy's bad behaviour. For eg. He shouted at his mother.

- (a)
- (b)
- (c)
- (d)

3. Answer the following questions:

- (a) Why did Tommy write a note to his mother?
.....
.....
- (b) What did Tommy do when Mr Smith came to his room?
.....
.....

**TOPIC: VERBS (DOING ARTICLES ('A' AND 'AN'))
WORKSHEET- II**

1. Fill in the blanks with indefinite article 'a' or 'an'.

- (a) There is cat on top of your car.
- (b) Would you like to have cup of tea?
- (c) eagle pounced on rat.
- (d) My grandmother waited there for hour.
- (e) This is great car.
- (f) This is awful car.
- (g) We are going to buy yacht.
- (h) She is giving me umbrella.
- (i) European was pleased to meet American.
- (j) There is university in London.

2. Answer the following in Yes /No. In case of 'No', write the correct answer in the space provided. One has been done for you.

- (a) Can we say a man?
- (b) Can we say an apples?
- (c) **Can we say a dogs?** **we say a dog.**
- (d) Can we say an owl?
- (e) Can we say an computer?
- (f) Can we say a umbrella?
- (g) Can we say an girl?
- (h) Can we say an union?
- (i) Can we say a igloo?
- (j) Can we say a hour?

विषय—हिंदी
अभ्यास पत्र—2
पाठ्यक्रम—लाल पतंग, एना की किताब
वाक्यांशों के लिए एक शब्द, क्रिया और अनुच्छेद लेखन

1. उचित क्रिया शब्द चुनकर वाक्य पूरे कीजिए।

(क) रेशमा ने मुझेऔर हँसने लगी। (देखा, लिखा)

(ख) गरिमा ने गीत। (गाया, दिखाया)

(ग) दुकानदार ने खराब माल.....। (बेचता, बेचा)

2. उचित शब्द चुनकर रिक्त स्थान भरिए।

(क) गाय घास खाती है। वहहै। (शाकाहारी, मांसाहारी)

(ख) शेर जंगल में रहता है। वह.....है। (जंगली, शहरी)

3. शब्दार्थ लिखिए।

(क) निराश (ख) उपहार

4. वाक्य बनाइए।

(क) निराश.....

5. प्रश्नों के सही उत्तर चुनिए।

(क) एना की मम्मी किस दुकान पर गई?

.....

(ख) दुकादार के बेटे का नाम क्या था?

.....

6. 'मेरी दादी/मेरे दादा' विषय पर दिए गए शब्दों की सहायता से अनुच्छेद लिखिए।

सुंदर, समझदार, चश्मा, कहानी सुनाती, खेलती, प्यार करती, घुमाने ले जाती, ध्यान रखती

.....
.....
.....
.....
.....
.....

**SUBJECT- MATH
WORKSHEET- II**

Topic:
Division
Money

1. Fill in the blanks

- (a) $9500 \div 1000, Q = \dots\dots\dots$, Divisor= $\dots\dots\dots$
- (b) $60000 \div 100, Q = \dots\dots\dots$, Divisor= $\dots\dots\dots$
- (c) $6402 \div 10, Q = \dots\dots\dots$, Divisor= $\dots\dots\dots$
- (d) $2335 \div 1000, Q = \dots\dots\dots$, Divisor= $\dots\dots\dots$
- (e) ₹ 5 and 75 Paise is written as.....
- (f)25 Paise coins make ₹ 1.

2. Convert the following into Paise:

- (a) ₹ 5.25.....
- (b) ₹ 10.50.....
- (c) ₹ 18.....

3. Convert the following amount into Rupees:

- (a) 945 Paise.....
- (b) 725 Paise.....
- (c) 550 Paise.....

- 4. 520 pens were distributed equally among 5 children. How many pens did each child get?**
- 5. There are 112 chairs in the cafeteria. How many rows of 10 chairs each can be made?**
- 6. Jack made 364 donuts. He put 8 donuts into each box. How many boxes of donuts were there? How many donuts were left?**
- 7. Tom had 649 apples. He distributed all apples equally among 9 friends. How many apples did Tom give to each of his friends? How many apples were left?**

SUBJECT- EVS
CHAPTER-CONTINENTS AND OCEANS
WORKSHEET- II

1. Choose the correct answer:

(a) Which of the following is not a continent?

- (i) Asia (ii) Africa
(iii) Atlantic (iv) Antarctica

(b) The Sun rises from the... direction.

- (i) North (ii) South
(iii) East (iv) West

(c) The number of oceans on the earth are ...

- (i) 7 (ii) 5
(iii) 6 (iv) 9

(d) ...is the smallest continent in the world.

- (i) Europe (ii) Australia
(iii) Asia (iv) Africa

2. Differentiate between Oceans and Continents. (any 2 points)



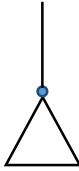
Oceans	Continents

SUBJECT– COMPUTER SCIENCE

Chapter – Log on to Logo

WORKSHEET –II


1. Match the following:

(a)	Turtle has moved in the forward direction.		
(b)	Turtle has moved in the backward direction.		
(c)	Turtle has turned left.		

2. Can you find out what figure will be formed when you give the following commands in LOGO? Draw the figure in the box given next to the commands.


(a)

FD 50
LT 90
FD 50
LT 90
FD 50
LT 90
FD 50



(b)

BK 100
FD 50
RT 90
FD 50
LT 90
FD 50
BK 100



3. Write the primitive to perform the following actions:

- (a) To move the turtle in forward direction by 80 steps _____
- (b) To make the turtle take a left turn _____
- (c) To make the turtle take a right turn _____
- (d) To make the turtle go back 50 steps _____
- (e) To make the turtle take a half turn _____

DELHI PUBLIC SCHOOL, SUSHANT LOK
TRIPLE TRACK PLAN – November' 17
CLASS – III



SUBJECT: ENGLISH
TOPIC: I WON'T TALK TO YOU!
WORKSHEET- III

1. RTC: Read the given lines and answer the questions that follow:

Once or twice Tommy came into the kitchen and looked at his mother. Mrs Smith waited for him to say something. But Tommy walked away quietly.

(a) Tommy looked at his mother because he
..... (complete the sentence)

(b) What did he want to say to his mother?
.....

(c) Make a sentence of your own using the word 'quietly'.
.....

2. Answer the following questions:

(a) How do you think Tommy's mother felt when he refused to speak to her?
.....
.....

(b) What was written in the note that Mrs Smith wrote to Tommy?
.....
.....

(c) Why did Tommy's mother write a note to him?
.....
.....

3. Tick the correct option:

What, do you think, happened after Tommy read his mother's note?

(a) He felt bad about his behaviour and said sorry to his parents.

(b) He got angry and misbehaved even more.

TOPIC: ARTICLES ('A' AND 'AN')
WORKSHEET III

1. **Make meaningful sentences using the word pairs given below. Use articles 'a' or 'an' with each word in the pair. One has been done for you.**

eagle, rat- An eagle pounced on a rat.

octopus, fish-

umbrella, boy-

machine, hour-

alligator, rock-

university, teacher-

honest, man-

igloo, eskimo-

girl, bottle-

engine, train-

2. **Articles 'a' and 'an' are missing in the passage given below. Mark the place and write the article on top.**

a
↑

My neighbourhood is very interesting place. My home is located in apartment building, near many stores and offices. There is small supermarket across the street where my family likes to go shopping. There is also post office and bank near our home. In our neighbourhood, there is small, green park where my family likes to have picnics on weekends. There is small pond in the park, and there are many ducks in the park.

विषय—हिंदी
अभ्यास पत्र—3
पाठ्यक्रम—लाल पतंग, एना की किताब
वाक्यांशों के लिए एक शब्द, क्रिया और अनुच्छेद लेखन

1. नीचे दिए गए रिक्त वाक्यों में से क्रिया शब्द चुनकर लिखिए।
(क) पिताजी ने कारीगर बुलाया है।
 - (ख) मैंने एक मजेदार कहानी पढ़ी।
 - (ग) बंदर पेड़ के पीछे छिपा है।
2. नीचे दिए वाक्यांशों के लिए एक शब्द लिखिए।
(क) अभिनय करने वाला
 - (ख) मूर्ति बनाने वाला
3. शब्दार्थ लिखिए।
(क) तरकीब
 - (ख) ऊबना.....
4. वाक्य बनाइए।
होशियार
5. प्रश्नों के उत्तर लिखिए।
(क) किसी भी कठिन काम को हम कैसे कर सकते हैं?
.....
.....
(ख) मम्मी एना को कहाँ ले गईं और उसने वहाँ क्या देखा?
.....
.....
6. 'मेरी मनपसंद किताब' विषय पर 8–10 वाक्यों का एक अनुच्छेद लिखिए।
.....
.....
.....
.....
.....
.....
.....
.....

**SUBJECT-MATH
WORKSHEET- III**

Topic:

- Division
- Money

1. Fill in the blanks:

- (a) We need.....50 Paise coins to make ₹ 3.
- (b) $0 \div 169 = \dots\dots\dots$
- (c) $455 \div 1 = \dots\dots\dots$
- (d)50 Paise and.....25Paise makes ₹ 1.
- (e) ₹ 70 + ₹ 1 + ₹ 6 =

2. Convert the following amount into Rupees/Paise:

- (a) 200 Paise = ₹
- (b) ₹ 5 =Paise
- (c) ₹ 900 =Paise
- (d) 7500 Paise = ₹

- 3. Mark baked 426 cookies and divided them equally into 6 packs. How many cookies did Mark put in each packet?**
- 4. Nancy needs 5 oranges to make a glass of orange juice. If Nancy has 250 oranges, how many glasses of orange juice can she make?**
- 5. A fruit farm packs 10 apples in one box. If a total of 2650 apples are packed, find the number of boxes used?**
- 6. On children's day, 1280 candies were distributed in a school. If each student gets 4 candies, how many students are there?**
- 7. Sam needs to pack 4539 toys equally in 6 cartons. How many toys can be packed in each carton? How many toys remain unpacked?**

SUBJECT-EVS
CHAPTER-CONTINENTS AND OCEANS
WORKSHEET-III

1. Answer the following questions:

(a) The Earth is also called the blue planet. Justify.

.....
.....

(b) How do we find a place on the map?

.....
.....

2. Define:

(a) Globe

(b) Map

3. On an outline map of the world show all the continents and oceans. Colour all the water bodies blue and land brown. Also locate your country India.



COMPUTER SCIENCE
Chapters – Log on to Logo
WORKSHEET-III

1. Answer the following:

(a) Find the error in the following LOGO commands:

(i) FD60 (FD and 60 without a space) _____

(ii) FD _____

(b) John has typed the following command one after the other:

FD 100

BK 50

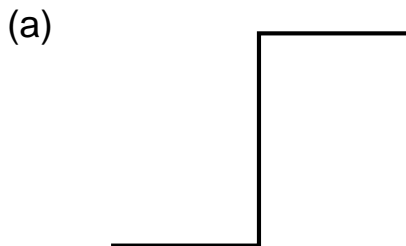
How far is the turtle from HOME? _____

2. Write Logo commands to move the turtle:

(a) Forward by 50 steps
Turn right
Move forward by 50 steps

(b) Back by 20 steps
Turn left
Move forward by 40 steps
Return the turtle to the HOME position

3. Write Logo commands to draw the following figures:



PS: Logo can be downloaded for children to practice at home from the website <http://www.softronix.com>