



DELHI PUBLIC SCHOOL, SUSHANT LOK
TRIPLE TRACK PLAN
CLASS – III (2017–18)

Learning must cater to every type of learner to accommodate the pace at which each child learns. Starting this year we bring to you a set of Triple Track Worksheets, graded from simple to challenging, hence offering something for each child. Let your child attempt the worksheets, he/she is most comfortable doing. Enhanced learning will then happen automatically.*

*A word of caution – Please don't push your child to start with the highest difficulty level (Level-3).

Principal

DELHI PUBLIC SCHOOL, SUSHANT LOK
TRIPLE TRACK PLAN – December'17
CLASS – III



SUBJECT: ENGLISH
READING SKILL
WORKSHEET-I
KNOW YOUR VEGETABLES

1. Read the passage carefully and answer the questions that follow:

- (i) Some animals eat only meat and they are called carnivores. Other animals eat only plants and these animals are called herbivores. The rest of the animals, including humans, are omnivores. Omnivores eat all kinds of food, both meat and plants. This means in order to be healthy, people must eat a variety of foods. Vegetarians are people who don't eat meat.
- (ii) Adults and kids need to eat vegetables so they can get the important vitamins and minerals that vegetables contain. Kids need to eat foods that contain the mineral calcium for strong bones and healthy teeth. Kids grow fast and their bones grow fast too. Kids need calcium to build healthy adult teeth after they lose their baby teeth. Broccoli and spinach are two vegetables that contain lots of calcium.
- (iii) Bright coloured vegetables contain lots of vitamins and minerals. What are some bright coloured vegetables? Red and yellow peppers are certainly brightly coloured. So aren't orange and carrots. Carrots and bright red tomatoes help to keep the heart healthy. Green beans and lettuce are good for keeping the heart healthy too. Other healthy bright green vegetables are green peas, broccoli and celery.
- (iv) Vegetables that grow underground are healthy because they get minerals from the soil. These root vegetables include carrots, beets, potatoes, sweet potatoes, turnips, parsnips and onions.

1. Circle the correct answer:

- (a) Animals that eat only meat are called
(i) Carnivores (ii) Herbivores
(iii) Omnivores
- (b) People who don't eat meat are called
(i) Carnivores (ii) Omnivores
(iii) Vegetarians
- (c) Kids need to eat foods that contain calcium in order to....
(i) have a healthy heart
(ii) have strong bones and teeth
(iii) grow tall
- (d) Which of these vegetables is brightly coloured?
(i) Carrot (ii) Potato
(iii) Both carrot and potato
- (e) Which of these vegetables is a root vegetable?
(i) Green bean (ii) Celery
(iii) Beet
- (f) Omnivores eat all kinds of.....
(complete the sentence)
- (g) Use the word 'grow' in a sentence of your own.
.....

SUBJECT: ENGLISH
AMIN AND THE EGGS
WORKSHEET-I

1. Read the given lines and answer the questions that follow:

(a) 'He turned to Amin with an angry look and said, 'What do you have to say? And, by the way, why are you late?'

(i)said the above lines to

(ii) Why is the speaker angry?

.....
.....

(iii) Where is the above conversation happening?

.....
.....
.....

(iv) The opposite of angry is.....

(b) Answer the following questions briefly:

(i) What did Amin buy from the merchant before he left his village?

.....
.....

(ii) Why did Amin leave his village?

.....
.....

(iii) How much did the merchant ask Amin to pay him?

.....
.....

(c) State whether the statements are true or false:

(i) The merchant was a greedy man

(ii) The judge believed that the merchant was speaking the truth

(iii) Amin returned to his village after ten years

विषय—हिंदी
अभ्यास पत्र—1
पाठ्यक्रम—सरदार पटेल
व्याकरण—अशुद्ध—शुद्ध (शब्द एवं वाक्य) और अनुच्छेद लेखन

1. निम्नलिखित शब्दों के अर्थ कोष्ठक में से छाँटकर लिखिए।
- (क) सूझ—बूझ..... (समझदार, समझदारी)
- (ख) परवाह (चिंता, प्रशंसा)
2. वाक्य बनाइए।
- (क) विद्यालय
- (ख) चोट
3. सही शब्दों से खाली स्थान भरिए।
- (क) वल्लभ केमें चोट लग गई थी।
- (ख) एक दिन तुम अपनेका नाम रोशन करोगे।
4. दिए गए प्रश्नों के सही उत्तर के आगे सही (✓) का निशान लगाइए।
- (क) अध्यापक ने वल्लभ को शाबाशी दी क्योंकि उसने
- (i) दूसरों की भलाई के बारे में सोचा। ()
- (ii) अपनी भलाई के बारे में सोचा। ()
- (ख) “चलो, स्कूल पहुँचने में देर हो जाएगी।” यह वाक्य किसने—किससे कहा?
- (i) माँ ने वल्लभ से ()
- (ii) दोस्तों ने वल्लभ से ()
5. दिए गए शब्दों में से शुद्ध शब्दों के सामने (✓) और अशुद्ध शब्दों के सामने (X) का निशान लगाइए।
- परनाम सूरज वर्षा चाहिए
6. अशुद्ध वाक्यों को शुद्ध करके लिखिए।
- (क) मैं आम खाया।
-
- (ख) मेरी बहन स्कूल जा रहा है।
-

7. नीचे दिए गए शब्दों की सहायता से 8–10 वाक्यों का अनुच्छेद लिखिए।

नाम, उम्र, साथ खेलते, खाना खाते, पढ़ते, मदद, मौज–मस्ती, एक–दूसरे का ध्यान रखते, भरोसा

मेरा भाई/मेरी बहन

मेरे परिवार मेंसदस्य हैं। माँ, पिताजी , और.....

मैं अपनी/अपने.....से बहुत प्यार.....

**SUBJECT-MATH
WORKSHEET- I**

Contents: Money

Measurement

1. Fill in the blanks:

- (a) 1L =ml
- (b) The standard unit for measuring weight is
- (c) Two 50 paise = ₹
- (d) 1m = cm
- (e) ₹ 49.50 + ₹ 54 = ₹.....
- (f) 50 kg = g

2. Convert:

- (a) 14 kg to g
- (b) 15 L to ml
- (c) 20 km 15 m to m
- (d) 87 kg 14 g to g
- (e) 70 m 3 cm to cm
- (f) 370 km to m

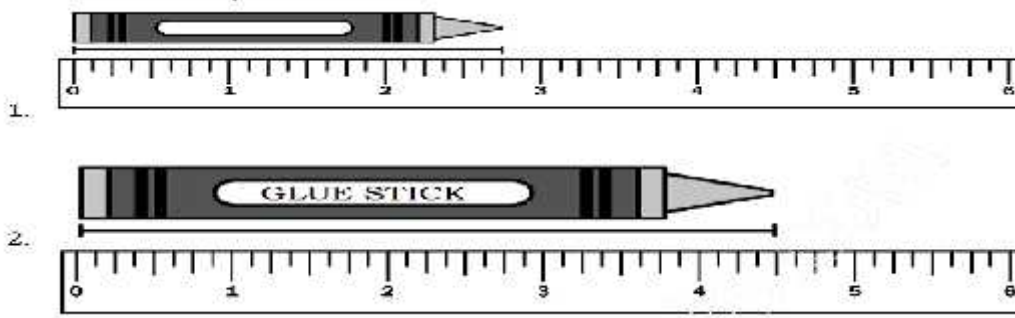
3. Subtract:

- (a) ₹ 0.75 from ₹ 25
- (b) ₹ 114.50 from ₹ 525.65


4. Add:

- (a) ₹ 25.30 and ₹ 40.43
- (b) ₹ 71.55 and ₹ 81.56

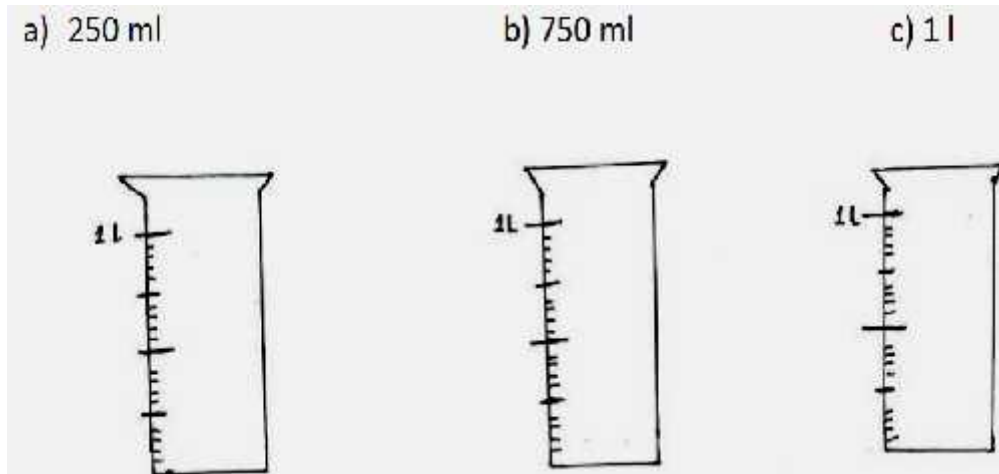
5. Measure the following



6. Circle the objects which weigh more



7. Colour the containers upto




8. Geeta deposited ₹ 1550.75 and ₹ 1670.50 as tuition fees for her two children. Find the total amount deposited by her as tuition fees.

9. Rhea earned ₹ 10500. She paid ₹ 3200 as rent. How much money was left with her?

SUBJECT- EVS
CHAPTER- MATTER AND ITS PROPERTIES
WORKSHEET- I

1. Mark S for solid, L for liquid and G for gas in the following given pictures:



SUBJECT – COMPUTER SCIENCE
CHAPTER: USING PRIMITIVES
WORKSHEET-I

1. Match the following:

(a)	To show the hidden turtle back on the screen			Clear Screen (CS)
(b)	Clear the picture drawn on the main screen			Show Turtle (ST)
(c)	Logo extension			Clear Text (CT)
(d)	Brings the turtle to centre position			.LGO
(e)	Clears the text present in the Recall List Box and Command Input Box			HOME

2. Fill in the blanks with the help of the words given in the help box:

Hide Turtle	HOME	Pen Up	Pen Erase	Clockwise
-------------	------	--------	-----------	-----------



- (a)command is used to lift up the pen from the screen and move without drawing a line.
- (b)is used to hide the turtle to view clear drawing on the screen.
- (c)command is used to erase a line while moving the turtle.
- (d) The RT command is used to move the turtle in direction.
- (e) The centre position of the turtle is known as the..... position.

3. Draw a square in LOGO and then write a command to hide the turtle.

DELHI PUBLIC SCHOOL, SUSHANT LOK
TRIPLE TRACK PLAN – December' 17
CLASS – III



SUBJECT: ENGLISH
READING SKILL
WORKSHEET-II
KNOW YOUR VEGETABLES

1. Read the passage carefully and answer the questions that follow:

- (i) Some animals eat only meat and they are called carnivores. Other animals eat only plants and these animals are called herbivores. The rest of the animals, including humans, are omnivores. Omnivores eat all kinds of food, both meat and plants. This means in order to be healthy, people must eat a variety of foods. Vegetarians are people who don't eat meat.
- (ii) Adults and kids need to eat vegetables so they can get the important vitamins and minerals that vegetables contain. Kids need to eat foods that contain the mineral calcium for strong bones and healthy teeth. Kids grow fast and their bones grow fast too. Kids need calcium to build healthy adult teeth after they lose their baby teeth. Broccoli and spinach are two vegetables that contain lots of calcium.
- (iii) Bright coloured vegetables contain lots of vitamins and minerals. What are some bright coloured vegetables? Red and yellow peppers are certainly brightly coloured. So aren't orange and carrots. Carrots and bright red tomatoes help to keep the heart healthy. Green beans and lettuce are good for keeping the heart healthy too. Other healthy bright green vegetables are green peas, broccoli and celery.
- (iv) Vegetables that grow underground are healthy because they get minerals from the soil. These root vegetables include carrots, beets, potatoes, sweet potatoes, turnips, parsnips and onions.

1. Tick the correct option:

- (a) Herbivores are animals who don't eat
 - (i) vegetables (ii) meat (iii) fruits

- (b) Calcium can be found in
 - (i) carrot and pepper (ii) broccoli and spinach
 - (iii) green beans and orange

- (c) The word 'healthy' (para i) means...
 - (i) fit (ii) ill (iii) poor

2. Answer the following questions briefly:

- (a) Name the three kinds of animals according to the food they eat?

.....
.....

- (b) Where do the root vegetables grow?

.....
.....

- (c) Why do kids need calcium?

.....
.....

3. Use the word 'strong' in a sentence of your own.

.....
.....

SUBJECT: ENGLISH
AMIN AND THE EGGS
WORKSHEET-II

1. Read the given lines and answer the questions that follow:

(a) 'Pay back the debt you owe me,' he said. 'Give me 500 silver coins for the eggs you bought.'

(i) Who said the above lines and to whom?

.....
.....

(ii) Why did the speaker ask him to pay back?

.....
.....

(iii) The meaning of **debt** is.....

(iv) Use the word 'bought' in a sentence of your own.

.....

(b) Answer the following questions briefly:

(i) Why did the merchant take Amin to the court?

.....
.....

(ii) Why did Amin refuse to pay the merchant?

.....
.....

(iii) Why did Amin come late to the court?

.....
.....

विषय—हिंदी

अभ्यास पत्र—2

पाठ्यक्रम—सरदार पटेल

व्याकरण—अशुद्ध—शुद्ध (शब्द एवं वाक्य) और अनुच्छेद लेखन

1. निम्नलिखित शब्दों के अर्थ लिखिए।

(क) टेस्ट.....

(ख) रास्ता

2. वाक्य बनाइए।

(क) कोशिश

(ख) पत्थर

3. सही शब्दों से खाली स्थान भरिए।

(क) अचानक वल्लभसे टकराकर गिर गया।

(ख) चोट लगने पर अध्यापक ने वल्लभ को स्कूल केपास भेजा।

4. प्रश्नों के उत्तर लिखिए।

(क) आगे चलकर वल्लभ किस नाम से मशहूर हुआ?

.....

(ख) घुटने में चोट लगने के बाद वल्लभ ने क्या सोचा?

.....

.....

5. दिए गए शब्दों में से शुद्ध शब्द पहचानकर सामने लिखिए।

(क) जन्मदिन जनमदिन जन्मदीन

(ख) क्योंकि क्योँकि कयोंकि

6. अशुद्ध वाक्यों को शुद्ध करके लिखिए।

(क) कोयल डाली में बैठी है।

.....

(ख) मेरे पिताजी सो रहा है।

.....

**SUBJECT– MATH
WORKSHEET– II**

Topic:

Contents: Money

Measurement

1. Convert:

- (a) 175 km to m
- (b) 75 m 38 cm to cm
- (c) 45kg 345g to g
- (d) 91 L 30 ml to ml
- (e) 40km 400m to m

2. Fill in the blanks:

- (a) 50 m = cm
- (b) 19 km =m
- (c) 10 kg =g

3. Do as directed:

(a) Add

- (i) ₹ 340.45 and ₹ 50.05
- (ii) ₹ 234 .90 and ₹ 12

(b) Subtract

- (i) ₹ 410.05 from ₹ 500
- (ii) ₹ 90.49 from ₹ 234.80


(c) Multiply

- (i) ₹ 2.50 x 5
- (ii) ₹ 10.75 x 82
- (iii) ₹ 5.25 x 4

(d) Divide

- (i) ₹ 2376 ÷ 9
- (ii) ₹ 430 ÷ 5

4. Solve the following:
Priya has ₹ 500. She buys



RS 235

How much money is left after buying the pizza?

5. How many paise are there in ₹ 7.00? How many 25-paise coins make ₹ 7 ?
6. Three pairs of socks cost ₹ 366. What is the cost of one pair of socks?

SUBJECT– EVS
CHAPTER: MATTER AND ITS PROPERTIES
WORKSHEET– II

1. Fill in the blanks:

- (a) Matter has states.
- (b) The change of matter from one state to another is called
- (c) Matter occupies and has
- (d) is a gaseous state of water.
- (e) is a process of change of solid into liquid.

2. Give two examples of the following:

- (a) Solid:..... ,
- (b) Liquid:..... ,
- (c) Gases:..... ,

3. Write T for True and F for False:

- (a) A liquid has a definite shape. ()
- (b) The most common liquid on the earth is water. ()
- (c) Solids, liquids & gases have many uses in our lives. ()
- (d) Matter exists in four states. ()
- (e) Water change from liquid to solid by heating. ()

SUBJECT- COMPUTER SCIENCE
CHAPTER: USING PRIMITIVES
WORKSHEET -II


1. Rearrange the following words and make meaningful Logo related words:

- (a) H D E I
- (b) R A E S E
- (c) T L U R E T
- (d) R P I M I V T E I S
- (e) M E O H
- (f) E P N P U

2. Complete the following table:

	Primitive	Short Form if any	Does it require steps with it?	Use of the primitive
(a)	Hide Turtle	HT	No	Hides the turtle from the screen
(b)	Show Turtle			
(c)	Clear Screen			
(d)	Clear Text			
(e)	PEN UP			
(f)	PEN DOWN			
(g)	PEN ERASE			
(h)	CLEAN			

3. Write LOGO commands to draw the following shape:



DELHI PUBLIC SCHOOL, SUSHANT LOK
TRIPLE TRACK PLAN – December' 17
CLASS – III



SUBJECT: ENGLISH
READING SKILL
WORKSHEET-I
KNOW YOUR VEGETABLES

1. Read the passage carefully and answer the questions that follow:

- (i) Some animals eat only meat and they are called carnivores. Other animals eat only plants and these animals are called herbivores. The rest of the animals, including humans, are omnivores. Omnivores eat all kinds of food, both meat and plants. This means in order to be healthy, people must eat a variety of foods. Vegetarians are people who don't eat meat.
- (ii) Adults and kids need to eat vegetables so they can get the important vitamins and minerals that vegetables contain. Kids need to eat foods that contain the mineral calcium for strong bones and healthy teeth. Kids grow fast and their bones grow fast too. Kids need calcium to build healthy adult teeth after they lose their baby teeth. Broccoli and spinach are two vegetables that contain lots of calcium.
- (iii) Bright coloured vegetables contain lots of vitamins and minerals. What are some bright coloured vegetables? Red and yellow peppers are certainly brightly coloured. So aren't orange and carrots. Carrots and bright red tomatoes help to keep the heart healthy. Green beans and lettuce are good for keeping the heart healthy too. Other healthy bright green vegetables are green peas, broccoli and celery.
- (iv) Vegetables that grow underground are healthy because they get minerals from the soil. These root vegetables include carrots, beets, potatoes, sweet potatoes, turnips, parsnips and onions.

1. Answer the following questions briefly:

(a) What kind of food do omnivores eat?

.....

(b) Why should children eat broccoli and spinach?

.....

(c) What do the bright colored vegetables contain?

.....

(d) Which vegetables keep the heart healthy?

.....

(e) Why are vegetables that grow underground healthy?

.....

(f) The antonym of 'dull' (para-iii) is

.....

(g) Use the word 'bright' in a sentence of your own.

.....

**SUBJECT: ENGLISH
AMIN AND THE EGGS
WORKSHEET-III**

1. Read the given lines and answer the questions that follow:

(a) 'He came on a fine black horse. Behind him was a camel carrying bags full of gold and silver coins.'

(i) Who is 'he' in the above lines?

.....
.....

(ii) Where was 'he' going on a horse?

.....
.....

(iii) The antonym of 'behind' is.....

(b) Answer the following questions briefly:

(i) Did Amin actually plant the boiled beans?

.....
.....

(ii) What kind of a person was Amin?

.....
.....

(iii) How did Amin win the case?

.....
.....

विषय—हिंदी
अभ्यास पत्र—3
पाठ्यक्रम—सरदार पटेल
व्याकरण—अशुद्ध—शुद्ध (शब्द एवं वाक्य) और अनुच्छेद लेखन

1. निम्नलिखित शब्दों के अर्थ लिखिए।

(क) मतभेद.....

(ख) स्कूल.....

2. वाक्य बनाइए।

(क) शाबाशी

(ख) मशहूर.....

3. निम्नलिखित प्रश्नों के उत्तर दीजिए।

(क) अध्यापक ने सारी घटना सुनकर वल्लभ से क्या कहा?

.....
.....

(ख) इस पाठ से आपको क्या सीख मिलती है? लिखिए।

.....
.....

(ग) “वल्लभ, यह चोट कैसे लग गई?” यह वाक्य किसने—किससे कहा?

.....

4. दिए गए अशुद्ध शब्दों को शुद्ध करके लिखिए।

दवाईयाँ..... शिक्षक

आशचर्य परिक्षा

5. निम्नलिखित अशुद्ध वाक्यों को शुद्ध करके लिखिए।

(क) उस लड़का को बुखार है।

.....

(ख) मेरे को घर जाना है।

.....

**SUBJECT-MATH
WORKSHEET- III**

Contents: Money

Measurement

1. Fill in the blanks:

(a) ₹ 900 = ₹ 300 + _____ + ₹ 50

(b) 80m = cm

(c) 5L 50 ml =ml

2. Arrange in

Ascending order: 5kg 600g , 6kg , 4kg 200g , 3kg

Descending order: 500g , 490g , 2kg , 2500g

3. Solve:

(a) A packet of stickers costs ₹ 125.85. If the cost has increased by ₹ 5.50 what was the old price of the stickers?

(b) A student went to a shop and bought a pack of crayons for ₹ 35.45. If he gave the shopkeeper a ₹ 50 note, how much would the shopkeeper return?

(c) A child went to a shop and bought a school bag for ₹ 549.32. He also bought a pencil box for ₹ 89.45 and a water bottle for ₹ 135. 56. How much did he spend in total?

(d) The price of a school bag is ₹ 250.95 but Priya has only ₹ 210.25. How much more money does she require to buy the bag?

4. Complete the bill and write the total money spent.

Item	Cost per item	Quantity	Total Cost
Water Bottles	₹ 50	4 water bottles	
Pencil Boxes	₹ 25	3 pencil boxes	
Socks	₹ 30	2 pair of socks	
Shirts	₹ 75	3 shirts	
Total			

5. Sonu has 10 litres of milk. He has to make pouches of 500 ml each. How many pouches can be made?

.....
.....
.....

6. Match the following weights and use = sign and write in the given space

1 kg of potato

2 kg of beans

2 kg of tomatoes

1000 g of chillies

4 kg of onions

500 g of sugar

$\frac{1}{2}$ kg of rice

2 kg of brinjal + 2 kg of beetroot

Ex: 3kg of carrots = 3000 g of potatoes

1. _____

2. _____

3. _____

4. _____

SUBJECT-EVS
CHAPTER: MATTER AND ITS PROPERTIES
WORKSHEET-III

1. Define the following:

(a) Evaporation:

.....
.....

(b) Melting:

.....
.....

(c) Condensation:

.....
.....

2. What are the properties of liquid?

.....
.....
.....

3. Draw a well labelled diagram of Water Cycle:

COMPUTER SCIENCE
CHAPTER: USING PRIMITIVES
WORKSHEET-III

1. Write true (T) or false (F).

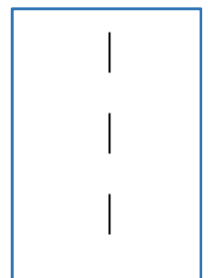
- (a) Logo commands have to be written in capital letters
- (b) LEFT turns the turtle clockwise
- (c) PE stands for PEN End
- (d) HT primitive does not need any steps

2. There are errors in the Logo commands given below. Write the correct commands.

- (a) FD40 _____
- (b) BACKWARD 50 _____
- (c) TURNLEFT70 _____
- (d) HOME 0 _____
- (e) PU 100 _____

3. Here is a flowchart for drawing a dashed line. Write Logo commands for the flowchart.

- Move forward 20 steps, pen up _____
- Move forward 20 steps, pen down _____
- Move forward 20 steps, pen up _____
- Move forward 20 steps, pen down _____
- Move forward 20 steps, hide turtle _____



4. Can you similarly write logo commands for drawing the dashed line as shown? Each part of the line is 25 steps long. Each part of the space is 20 steps long.

