



DELHI PUBLIC SCHOOL, SUSHANT LOK
CLASS – II

Triple Track Plan

Learning must cater to every type of learner to accommodate the pace at which each child learns. Starting this year we bring to you a set of Triple Track Worksheets, graded from simple to challenging, hence offering something for each child. Let your child attempt the worksheets, he/she is most comfortable doing. Enhanced learning will then happen automatically.*

*A word of caution – Please don't push your child to start with the highest difficulty level (Level-3).

Principal

DELHI PUBLIC SCHOOL, SUSHANT LOK
CLASS – II
TRIPLE TRACK PLAN – November '17



Subject – English
Topic: Action Words
Worksheet-I

1. Look at the picture and choose the correct word from the bracket and fill in the blank:

(a) My father is _____ pasta. (dancing/ cooking)



(b) Ria is _____. (painting/ eating)



(c) Ram is _____ fast. (dancing/ running)



(d) Tina is _____ porridge. (drinking/ eating)



(e) Maya loves to _____. (sing/ dance)



2. Choose the correct word from the bracket and fill in the blanks.

(a) Liza _____ flowers. (hated/ loved)

(b) Liza _____ to the garden with a basket. (goes/ gone)

(c) She _____ a sad looking fairy. (see/ saw)

(d) Liza was _____ because all the flowers had become brown.
(laughing/ crying)

(e) Liza promised never to _____ flowers again. (pluck/ plucking)

3. Colour the beautiful flowers given below and fill in the blanks by choosing the correct answer from the box.



flower	beautiful	colourful
pluck	lotus	perfume

- (a) My favourite _____ is rose.
- (b) Flowers are _____ and _____.
- (c) We get _____ from flowers.
- (d) We should not _____ flowers.
- (e) Our national flower is _____.

Spellings of the Month

vase	harvest	national
promise	celebrate	

विषय—हिंदी
अभ्यास पत्र—1
पाठ्यक्रम—चूहे का फैसला
व्याकरण—क्रिया, रचनात्मक कार्य

प्र0.1 चित्रों को देखकर सही मात्रा लगाकर शब्द बनाइए।

(क) घड़



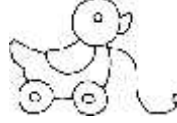
(ख)चड़ य



(ग) कय ल



(घ)ख लन



प्र0.2 सही शब्द छाँटकर खाली स्थान भरिए।

(क) तुमकाम करो (अपना/तुम्हारा)

(ख)क्या पढ़ रहा है? (वे/वह)

(ग) मैंस्कूल जा रहा हूँ। (अपने/मेरे)

(घ) मोहन कोकिताब दे दो। (उसकी/उनकी)

(ङ) कलअपने मामाजी के घर जाऊँगा। (हम/मैं)


प्र0.3 चित्र देखकर वाक्य पूरे कीजिए।

(क) यह मेरीहै।

(ख) इसमेंपहिए हैं।

(ग) इसमें दो.....हैं।

(घ) यह कार मुझे बहुतहै।



प्र0.4 सही उत्तर चुनकर खाली स्थान भरिए।

(क) चूहासे परेशान था।

(भूख से / बिल्लियों से)

(ख) चूहा बचकरभागा।

(रसोईघर में / बिल में)

प्र0.5 दिए गए वाक्यों के आधार पर चित्र बनाइए।

(क) सूरज निकल रहा है।

(ख) चिड़िया उड़ रही है।

(ग) तालाब में सुंदर कमल खिले हैं।

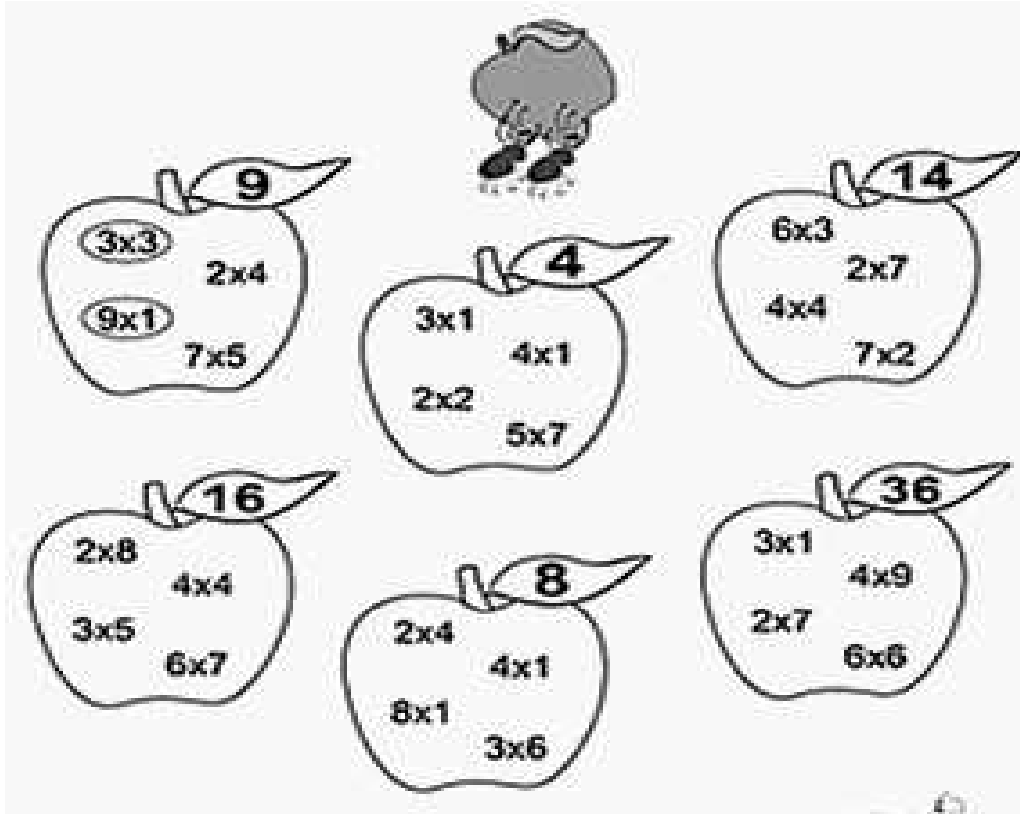
(घ) मछलियाँ तैर रही हैं।

(ङ) पेड़ पर पक्षी बैठे हैं।

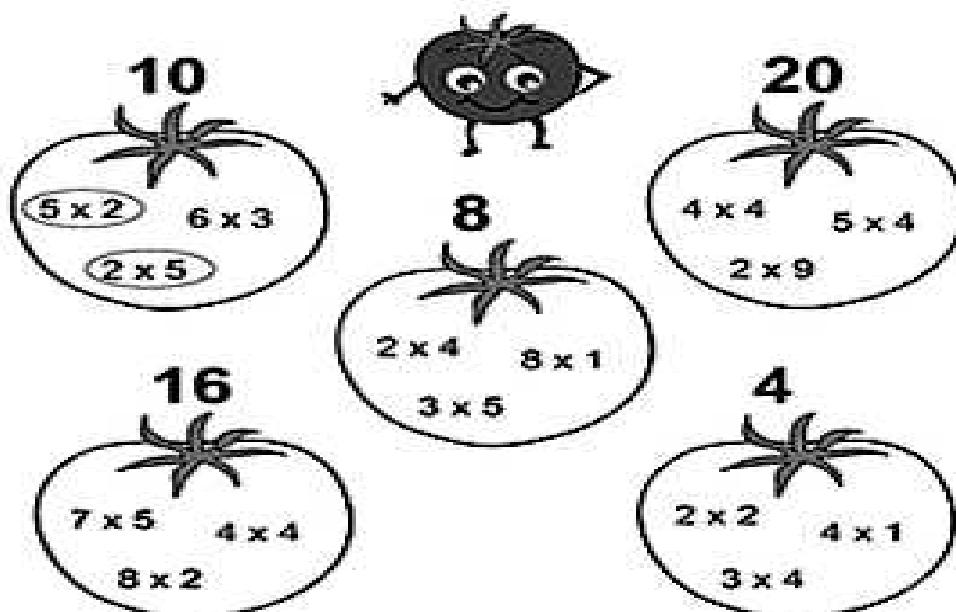
चित्र

Subject – Mathematics
Topic: Multiplication
Worksheet–I

1. (a) Multiply the number inside the apple and circle the ones that match up to the number on the leaf.



- (b) Multiply the number inside the tomato and circle the ones that match up to the number on the top.



2. Multiply and find the product.

$$\begin{array}{r} \text{(a) H T O} \\ 25 \\ \times \quad 5 \\ \hline \\ \hline \end{array}$$

$$\begin{array}{r} \text{(b) H T O} \\ 47 \\ \times \quad 7 \\ \hline \\ \hline \end{array}$$

$2 \times 5 = 10$

$3 \times 4 = 12$

$3 \times 5 = 15$

$4 \times 7 = 28$

$5 \times 5 = 25$

$6 \times 6 = 36$

$7 \times 7 = 49$

$$\begin{array}{r} \text{(c) H T O} \\ 45 \\ \times \quad 3 \\ \hline \\ \hline \end{array}$$

$$\begin{array}{r} \text{(d) H T O} \\ 66 \\ \times \quad 6 \\ \hline \\ \hline \end{array}$$

3. Fill in the blanks with correct digits:

$(a) \quad 2 \times 1 = \underline{\quad}$

$(b) \quad 7 \times 0 = \underline{\quad}$

$(c) \quad 5 \times \underline{\quad} = 10$

$(d) \quad \underline{\quad} \times 7 = 21$

$(e) \quad 4 \times 3 = \underline{\quad}$

$(f) \quad 6 \times \underline{\quad} = 36$

4. Complete the following:

$(a) \quad 7 \times 6 = \underline{\quad}$

$(b) \quad 5 \times 4 = \underline{\quad}$

$(c) \quad 2 \times 8 = \underline{\quad}$

$(d) \quad 4 \times 7 = \underline{\quad}$

$(e) \quad 6 \times 8 = \underline{\quad}$

$(f) \quad 4 \times 6 = \underline{\quad}$

$(g) \quad 6 \times 6 = \underline{\quad}$

$(h) \quad 1 \times 3 = \underline{\quad}$

5. Word Problems:

(a) There are 74 pages in an Atlas book. How many pages are there in 5 such books?

Solution:

Number of pages in 1 Atlas book = _____

Number of Atlas books = _____

Number of pages in Atlas books = _____

(b) Everyday Priya feeds 38 birds. How many birds she feeds in 7 days?

Solution:

Number of birds Priya feeds in 1 day = _____

Number of days = _____

Number of birds Priya feeds in 7 days = _____

Subject-EVS
Topic: Animals
Worksheet-I

1. Write T for true and F for false sentences.

- (a) A dog is a pet animal . _____
- (b) A tiger helps farmers in the field. _____
- (c) A rabbit lives in a cave. _____
- (d) A bear eats both plants and flesh . _____

2. Circle the correct answer:

This animal gives us eggs.	Sheep	cow	hen
This is made from the skin of dead animals	Perfume	leather	pencil
This animal lives in a den	Lion	rabbit	camel
This is a flesh eating animal.	Deer	tiger	elephant

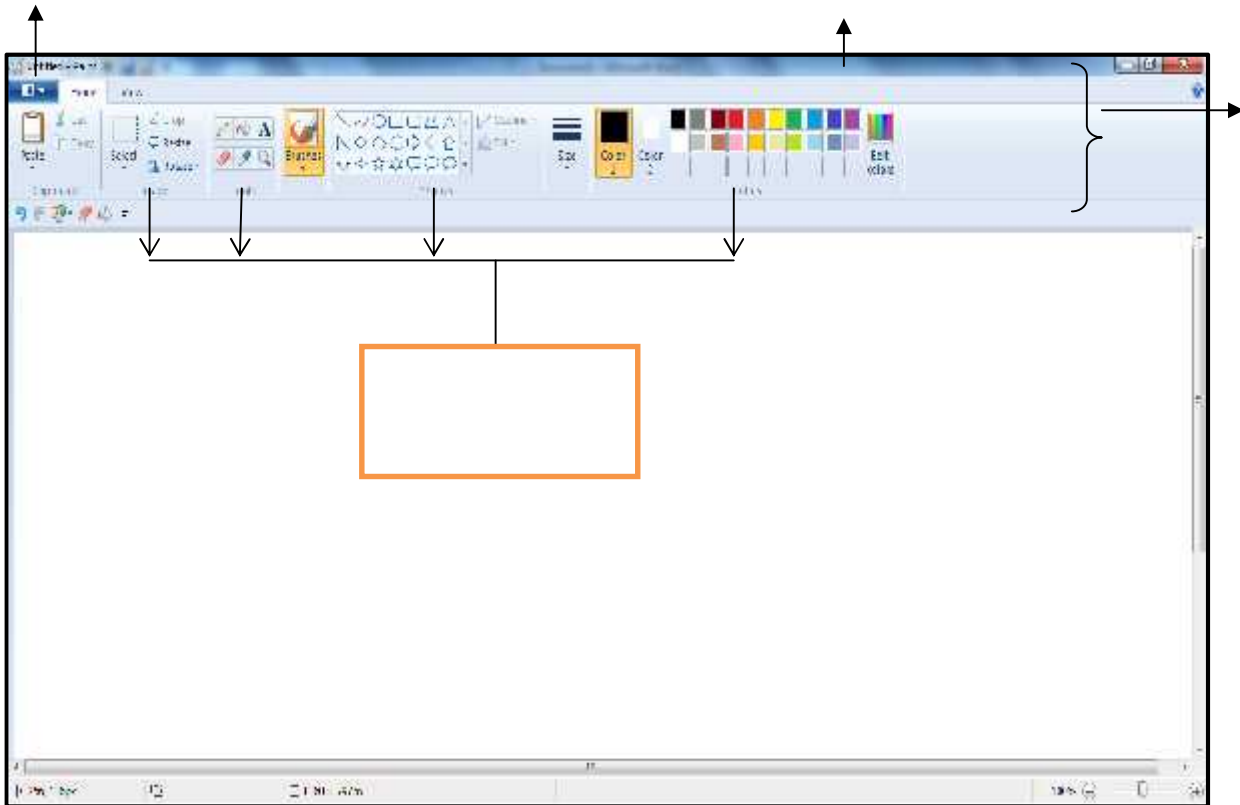
3. Write the names of animals that are:

VERY BIG	BIG	SMALL	VERY SMALL


Subject: Computer Science
Topic: Fun with Paint
Worksheet-I


1. Label the following 4 parts in the MS Paint Window:


Group	Ribbon	Paint Button	Title Bar
--------------	---------------	---------------------	------------------



2. Complete the names of these MS Paint tools:

(a)  F _ _ LL with C _ _ _ O _ _ Tool

(b)  _ _ E _ _ T Tool

(c)  _ _ E _ _ C I _ _ Tool

DELHI PUBLIC SCHOOL, SUSHANT LOK
CLASS – II
TRIPLE TRACK PLAN – November '17



Subject- English
Topic: Action Words
Worksheet–II


1. Underline the action words in the given sentences.

- (a) Rahul runs in the park in the morning.
- (b) The cat jumped onto the fence.
- (c) Sara is listening to her favourite song.
- (d) Ria is writing a letter to her grandfather.
- (e) Mr. Mathew drives his car to his farm.
- (f) My friend plays tennis in the evening.
- (g) This shop opens at 8'o clock.
- (h) He goes to office by train.

2. Let's read the story and circle the correct form of action words using red crayon or red coloured pencil.

My pet cat (love/loves) music. While listening to music, she (sit/sits) by the window. She (watch/watches) the birds from there. Sometimes, she (jump/jumps) out of the window to catch them. She (run/runs) after them. But, the birds (fly/flies) away. She never (catches/catch) any. Then, she sadly (come/comes) into the house. The birds (come/comes) back as soon as she leaves.

3. We all like to have fun in the park in the evening. Look at the picture and write how you like to enjoy with your friends in the park.





Spellings of the month:

pretty afraid exchange parade excitement colourful fairy smiling



विषय—हिंदी
अभ्यास पत्र—2
पाठ्यक्रम—चूहे का फैसला
व्याकरण—क्रिया, रचनात्मक कार्य

प्र0.1 नीचे दिए गए वर्णों से सही क्रम लिखकर शब्द बनाइए।


गु ब ला



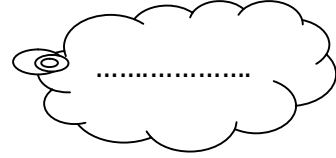
द ग र ब



ड़ की ल



ता ब कि



प्र0.2 वाक्य बनाइए।

(क) अमन + स्कूल + जाता + है।

.....

(ख) गाय + घास + खाती + है।

.....

(ग) मैं + खिलौने + से + खेलता + हूँ।

.....

(घ) मैं + किताब + पढ़ती + हूँ।

.....

प्र0.3 पाठ के आधार पर रिक्त स्थान भरिए।

(क) चूहामें रहता था।

(ख) दोनों बिल्लियाँ.....बात पर लड़ रही थीं।

(ग) चूहा बहुतथा।

(घ) काली बिल्लीपर गुर्वाई।

(ङ)ने तो मुझे परेशान कर दिया है।

प्र0.4 किसने किससे कहा?

किसने

किससे

(क) "रसोई में दूध-मलाई रखी है, वही खा लो ना।"

.....

.....

(ख) "मौसी, मैं तो आपकी मदद करना चाहता हूँ।"

.....

.....

प्र0.5 चित्र देखकर आठ-दस वाक्य लिखिए।



मेला, गुब्बारेवाला, माता-पिता, बच्चे, झूला, दुकानें, आइसक्रीम, घर, पेड़

.....

.....

.....

.....

.....

.....

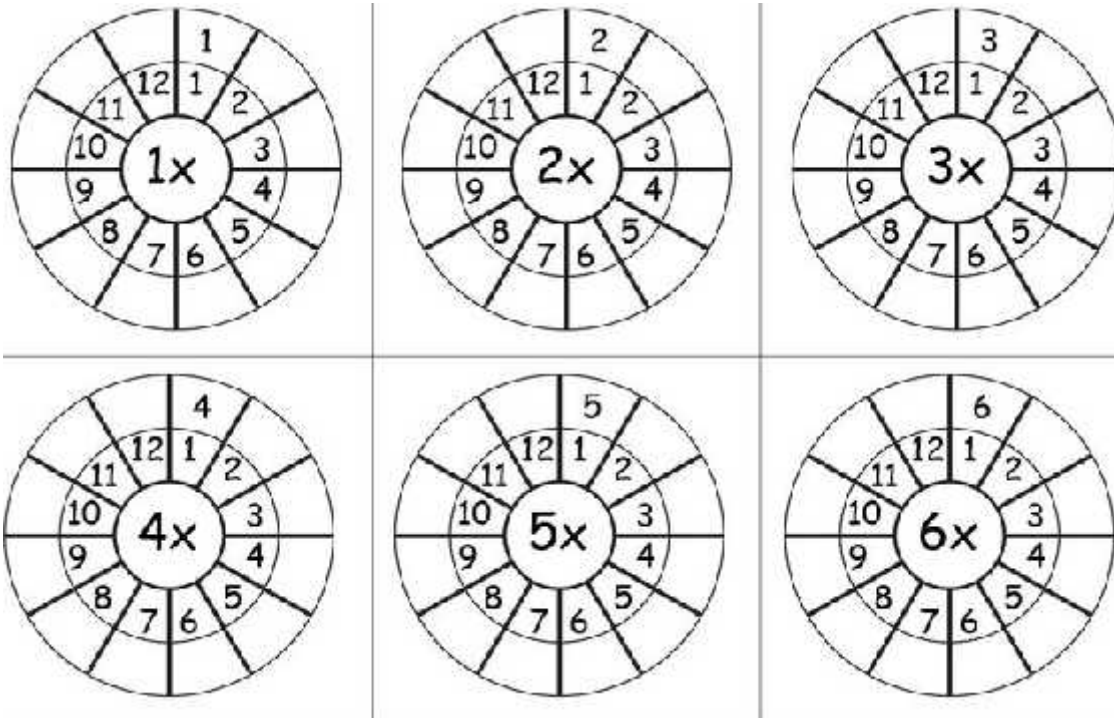
.....

.....

Subject: Mathematics
Topic: Multiplication
Worksheet-II

1. Multiply the numbers by the number in the center.

R.W.



2. Solve the given problems and fill in the blanks:

- (a) 10 children have _____ legs.
- (b) 5 weeks have _____ days.
- (c) 20 chairs have _____ legs
- (d) 16 horses have _____ eyes.

3. Put the correct sign (+, -, X):

- (a) $5 \text{ _____ } 5 = 25$
- (b) $9 \text{ _____ } 8 = 72$
- (c) $20 \text{ _____ } 3 = 17$
- (d) $14 \text{ _____ } 8 = 06$
- (e) $25 \text{ _____ } 25 = 50$

4. Solve:

$$\begin{array}{r} \text{H T O} \\ 108 \\ \times 7 \\ \hline \\ \hline \end{array}$$

$$\begin{array}{r} \text{H T O} \\ 129 \\ \times 3 \\ \hline \\ \hline \end{array}$$

$$\begin{array}{r} \text{H T O} \\ 115 \\ \times 5 \\ \hline \\ \hline \end{array}$$

$$\begin{array}{r} \text{H T O} \\ 114 \\ \times 6 \\ \hline \\ \hline \end{array}$$



5. Word Problems:

(a) A carton has 85 dresses. How many dresses would 4 cartons have?

(b) There are 75 books in a shelf. How many books are there in 6 such shelves?

(c) There are 48 children sitting in a row. How many children are sitting in 7 such rows ?

Subject-EVS
Topic: Animals
Worksheet-II

1. Fill in the blanks:

- (a) Pet animals live in our _____.
- (b) _____ is kept on the farm.
- (c) Animals that eat grass are called _____.
- (d) Skin of _____ and _____ is used to make leather.
- (e) We get honey and wax from _____.
- (f) All things made from milk are called _____.

2. Solve the following riddles:

- (a) I catch rats, that hide under mats _____
- (b) I have a pouch and I carry my baby in it _____
- (c) I have eight legs and I live in water _____
- (d) I give you eggs to make omelette _____
- (e) I live in a shed that you can paint red _____

3. Name any two:

- (a) Carnivores _____
- (b) Scavengers _____
- (c) Aquatic animals _____
- (d) Omnivores _____
- (e) Dairy products _____

Subject – Computer Science
Topic: Fun with Paint
Worksheet –II

1. Fill in the blanks. Use the hints from the box below:

HINTS:

*Drawing Area *Three * Paint * Pencil *Title Bar

- (a) _____ button contains different options to work in Paint.
- (b) The blue bar at the top of the screen in MS Paint is called _____
- (c) The Ribbon consists of _____ parts.
- (d) _____ covers the major part of the Paint window.
- (e) The _____ tool is used to draw free-form lines.

2. Match the following tools with their use:

	Tool Name		Use of the Tool
(a)	Text tool		Erases a drawing
(b)	Eraser tool		Used to add text
(c)	Curve tool		Used to draw free form drawing
(d)	Fill Color tool		Adds a curved line
(e)	Pencil Tool		Fills color in the drawing

DELHI PUBLIC SCHOOL, SUSHANT LOK
CLASS – II
TRIPLE TRACK PLAN – November '17



Subject- English
Topic: Action Words
Worksheet – III

Read the following poem:

Flies buzz,
Birds chirp,
Motors roar,
People snore,
 Cows moo,
 Cars honk: Beep! Beep!
 Bells clang,
 Doors slam: Bang! Bang!
Kids shout,
Babies cry,
Phones ring,
Birds sing.

1. From the poem list the naming words and doing/action words here:

Naming words:

Action Words:

2. Fill in the blanks using the action words given.

play teaches helps twinkle cooks walks writes eat read sang

- (a) I _____ an apple every day.
(b) Tisha _____ letters to her cousin.
(c) Let us go out and _____ in the ground.

- (d) My grandmother _____ in the park.
- (e) The singer _____ a beautiful song.
- (f) My mother _____ me with the homework.
- (g) Stars _____ in the sky at night.
- (h) Our teacher _____ us.
- (i) My mother _____ tasty food.
- (j) Ria loves to _____ storybooks.

3. Observe the picture carefully and write few sentences below:



Spellings of the month:

delicious stitch bonfire jaggery guard bitter bucket

विषय—हिंदी
अभ्यास पत्र—3
पाठ्यक्रम—चूहे का फैसला
व्याकरण—क्रिया, रचनात्मक कार्य

प्र0.1 पाठ के आधार पर सही अर्थ से मिलान कीजिए।

परेशान	घायल
बलवान	ताकतवर
नज़र आना	दुखी
दुबका	दिखाई देना
ज़ख्मी	छिपा

प्र0.2 सही वाक्य बनाइए।

(क) किताब मैं हूँ पढ़ती।

.....

(ख) मछली है तैरती तालाब।

.....

(ग) नदी में नहाता है हाथी।

.....

प्र0.3 आप स्कूल कितने बजे जाते हैं? लिखिए।

.....

प्र0.4 आप शाम के समय क्या—क्या करते हैं?

.....

.....

प्र0.5 किसने—किससे कहा?

(क) "मैं कब से परदे के पीछे बैठी हूँ।"

.....

(ख) "मुझे उसकी चमकती हुई आँखें नज़र आ रही हैं।"

.....

प्र0.6 नीचे दिए गए चित्र को ध्यान से देखकर पाँच से छह वाक्य लिखिए।



.....

.....

.....

.....

.....

.....

.....

.....

.....

.....

.....

.....

.....

.....

.....

.....

.....

.....

.....

.....

.....

.....

Subject: Mathematics
Topic: Multiplication
Worksheet –III

1. Look at the number grid given below. Rohit and Reena have to find out how many pairs of numbers are there in this grid whose product is 18. Can you help them to do this?

9	2	5	7
6	3	8	5
5	4	3	6
7	6	2	9



2. Fill in the blanks:

- (a) $6 \times 4 =$ _____ tens + _____ ones
 (b) $7 \times 9 =$ _____ tens + _____ ones
 (c) 2 tens + 8 ones = _____ $\times 7$
 (d) 3 tens + 5 ones = $5 \times$ _____
 (e) $7 \times 8 =$ _____ tens + 6 ones

3. Fill in the boxes to solve the puzzle:

(a)

2	\times		$=$	6			\times	5	$=$	40
				\times						
	\times	1	$=$		3	\times	8	$=$		
				$=$	$=$					
	\times	24	$=$							

(b)

	X	2	=	8		4	X	7	=	
				X		X				
	X	1	=	2			X	6	=	24
				=		=				
		X		=						16

4. Have a go at solving these multiplication word problems. Can you spot the 'trick' problem' which are not multiplication problem?

- (a) There are 5 pens in a pack. How many pens are there in 6 packs?
- (b) I download 13 games onto my tablet. The next day I download 3 more.
- (c) How many have I downloaded?
- (d) A guitar has 6 strings. How many strings would I need to restring 4 guitars?
- (e) My friend had 34 candies. She ate 20 candies. How many candies were left with her?
- (f) How many legs do 5 dogs have?

5. A shopkeeper sells 79 chocolates in a day. How many chocolates did he sell in a week?

Subject- EVS
Topic: Animals
Worksheet– III

1. Write one use of each of the following animals:

- (a) Hen _____
- (b) Silkworm _____
- (c) Buffalo _____
- (d) Snake _____
- (e) Sheep _____

2. Arrange the name of the homes in the following table:

Den	Cave	Beehive	Nest	Burrow
Tree	Shed	Hole	Kennel	Coop

Animal-made homes	Natural homes	Man-made homes

3. On a sheet of chart paper, draw an outline of a tree. Spread glue on inside of the outline. Now paste pictures of different birds and write their names.

Subject – Computer Science
Topic: Fun with Paint
Worksheet–III





1. Draw the following tools in the boxes given below:

Curve Tool

Text Tool

Fill with Color

Pencil Tool



2. Draw the following shape in MS Paint with the help of various tools:

(a) Use curve tool to make the shape shown here.



(b) Use pencil tool to make the shape shown here.



(c) Use text tool to write the text shown here.

I study in DPS school.

3. State True (T) or False (F)

(a) You can insert text into the picture with curve tool. _____

(b) The blue bar at the top of the screen is known as Title bar. _____

(c) Color1 is used to show foreground color. _____

(d) Ribbon consists of three parts. _____